

# 12: NUCLEAR MAGNETIC RESONANCE SPECTROSCOPY



## CHAPTER OVERVIEW

### 12: NUCLEAR MAGNETIC RESONANCE SPECTROSCOPY

#### Learning Objectives

After reading this chapter and completing ALL the exercises, a student can be able to

- explain how  $^1\text{H}$  NMR spectrometers work - refer to section 12.1
- interpret chemical shifts of  $^1\text{H}$  NMR spectra as they relate to shielding and deshielding - refer to section 12.2 and 12.14
- explain the delta scale of  $^1\text{H}$  NMR spectra - refer to section 12.3
- recognize equivalent protons within an organic compound - refer to section 12.4
- correlate functional group structural features with chemical shifts - refer to section 12.5
- determine the proton ratio from  $^1\text{H}$  NMR spectra peak integration data - refer to section 12.6
- explain and interpret spin-spin splitting patterns in  $^1\text{H}$  NMR spectra - refer to section 12.7
- explain and interpret spin-spin splitting patterns in  $^1\text{H}$  NMR spectra - refer to section 12.8
- describes examples of some uses of  $^1\text{H}$  NMR spectroscopy - refer to section 12.9
- explain how  $^{13}\text{C}$  NMR spectrometers work - refer to section 12.10
- interpret the chemical shifts of  $^{13}\text{C}$  NMR spectra to determine the structural features of organic compounds - refer to section 12.11 and 12.14
- explain how DEPT (distortionless enhancement by polarization transfer) is used to determine the number of hydrogens bonded to each carbon - refer to section 12.12
- describes some uses of  $^{13}\text{C}$  NMR spectroscopy - refer to section 12.13

[12.1: Theory of Nuclear Magnetic Resonance \(NMR\)](#)

[12.2: NMR Spectra - an introduction and overview](#)

[12.3: Chemical Shifts and Shielding](#)

[12.4:  \$^1\text{H}\$  NMR Spectroscopy and Proton Equivalence](#)

[12.5: Functional Groups and Chemical Shifts in  \$^1\text{H}\$  NMR Spectroscopy](#)

[12.6: Integration of  \$^1\text{H}\$  NMR Absorptions- Proton Counting](#)

[12.7: Spin-Spin Splitting in  \$^1\text{H}\$  NMR Spectra](#)

[12.8: More Complex Spin-Spin Splitting Patterns](#)

[12.9: Uses of  \$^1\text{H}\$  NMR Spectroscopy](#)

[12.10:  \$^{13}\text{C}\$  NMR Spectroscopy](#)

[12.11: Chemical Shifts and Interpreting  \$^{13}\text{C}\$  NMR Spectra](#)

[12.12:  \$^{13}\text{C}\$  NMR Spectroscopy and DEPT](#)

[12.13: Uses of  \$^{13}\text{C}\$  NMR Spectroscopy](#)

[12.14: More NMR Examples](#)

[12.15: Sample NMR Spectra](#)

---

12: Nuclear Magnetic Resonance Spectroscopy is shared under a [CC BY-NC-SA 4.0](#) license and was authored, remixed, and/or curated by LibreTexts.

## 12.1: THEORY OF NUCLEAR MAGNETIC RESONANCE (NMR)

### NUCLEAR PRECESSION, SPIN STATES, AND THE RESONANCE CONDITION

Some types of atomic nuclei act as though they spin on their axis similar to the Earth. Since they are positively charged they generate an electromagnetic field just as the Earth does. So, in effect, they will act as tiny bar magnets. Not all nuclei act this way, but fortunately both  $^1\text{H}$  and  $^{13}\text{C}$  do have nuclear spins and will respond to this technique.



### NMR SPECTROMETER

In the absence of an external magnetic field the direction of the spin of the nuclei will be randomly oriented (see figure below left). However, when a sample of these nuclei is placed in an external magnetic field, the nuclear spins will adopt specific orientations much as a compass needle responds to the Earth's magnetic field and aligns with it. Two possible orientations are possible, with the external field (*i.e.* parallel to and in the same direction as the external field) or against the field (*i.e.* antiparallel to the external field). See figure below right.

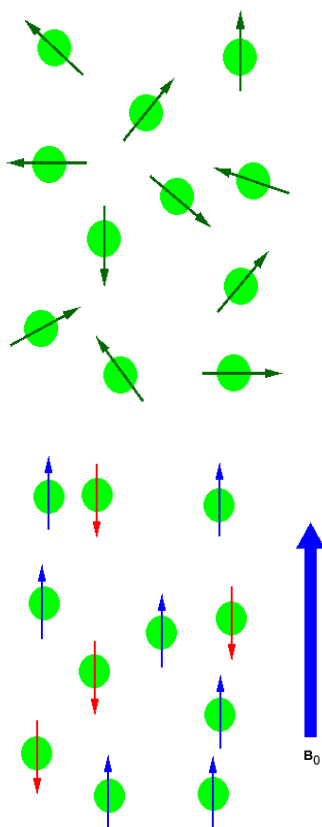
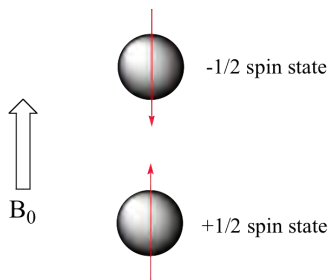


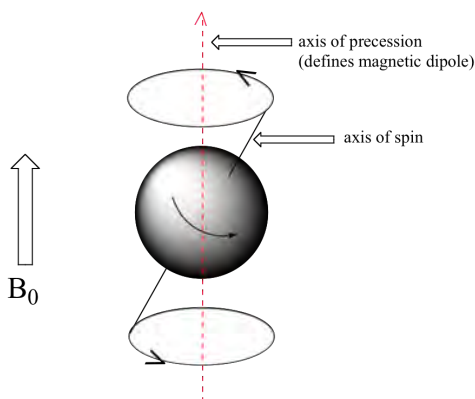
Figure 1: (Left) Random nuclear spin without an external magnetic field. (Right) Ordered nuclear spin in an external magnetic field

When the same sample is placed within the field of a very strong magnet in an NMR instrument (this field is referred to by NMR spectroscopists as the **applied field**, abbreviated  $B_0$ ) each hydrogen will assume one of two possible **spin states**. In what is referred to as the  $+\frac{1}{2}$  spin state, the hydrogen's magnetic moment is aligned *with* the direction of  $B_0$ , while in the  $-\frac{1}{2}$  spin state it is aligned *opposed* to the direction of  $B_0$ .



Because the  $+\frac{1}{2}$  spin state is slightly lower in energy, in a large population of organic molecules slightly more than half of the hydrogen atoms will occupy this state, while slightly less than half will occupy the  $-\frac{1}{2}$  state. *The difference in energy between the two spin states increases with increasing strength of  $B_0$ .* This last statement is in italics because it is one of the key ideas in NMR spectroscopy, as we shall soon see.

At this point, we need to look a little more closely at how a proton spins in an applied magnetic field. You may recall playing with spinning tops as a child. When a top slows down a little and the spin axis is no longer completely vertical, it begins to exhibit **precessional motion**, as the spin axis rotates slowly around the vertical. In the same way, hydrogen atoms spinning in an applied magnetic field also exhibit precessional motion about a vertical axis. It is this axis (which is either parallel or antiparallel to  $B_0$ ) that defines the proton's magnetic moment. In the figure below, the proton is in the  $+1/2$  spin state.

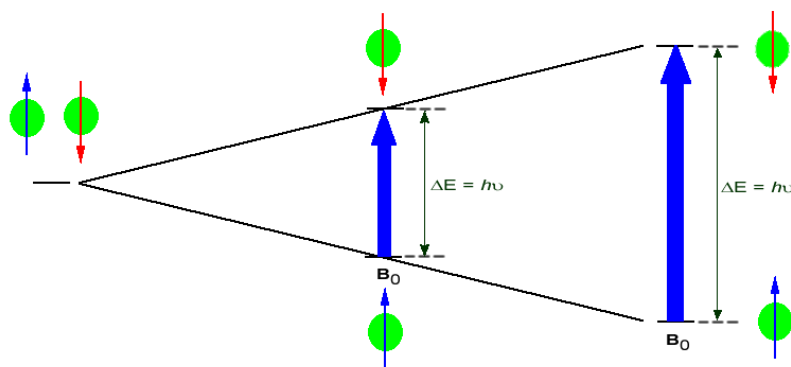


The **frequency of precession** (also called the **Larmour frequency**, abbreviated  $\omega_L$ ) is simply the number of times per second that the proton precesses in a complete circle. A proton's precessional frequency increases with the strength of  $B_0$ .

If a proton that is precessing in an applied magnetic field is exposed to electromagnetic radiation of a frequency  $\nu$  that matches its precessional frequency  $\omega_L$ , we have a condition called **resonance**. *In the resonance condition, a proton in the lower-energy  $+\frac{1}{2}$  spin state (aligned with  $B_0$ ) will transition (flip) to the higher energy  $-\frac{1}{2}$  spin state (opposed to  $B_0$ ). In doing so, it will absorb radiation at this resonance frequency  $\nu = \omega_L$ .* This frequency, as you might have already guessed, corresponds to the energy difference between the proton's two spin states. With the strong magnetic fields generated by the superconducting magnets used in modern NMR instruments, the resonance frequency for protons falls within the radio-wave range, anywhere from 100 MHz to 800 MHz depending on the strength of the magnet.

If the ordered nuclei are now subjected to EM radiation of the proper frequency the nuclei aligned with the field will absorb energy and "spin-flip" to align themselves against the field, a higher energy state. When this spin-flip occurs the nuclei are said to be in "resonance" with the field, hence the name for the technique, **Nuclear Magnetic Resonance** or **NMR**.

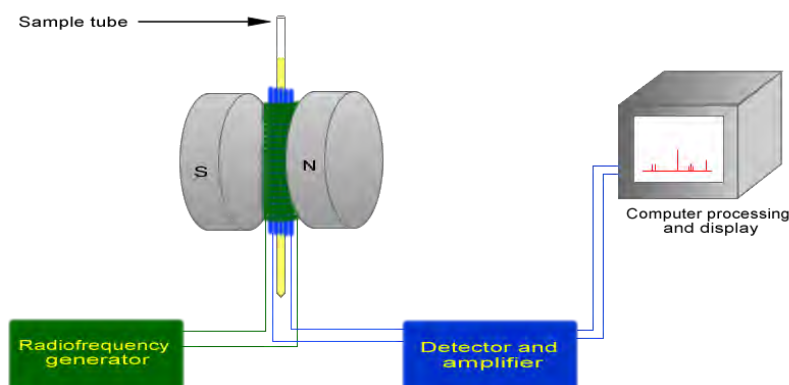
The amount of energy, and hence the exact frequency of EM radiation required for resonance to occur is dependent on both the strength of the magnetic field applied and the type of the nuclei being studied. As the strength of the magnetic field increases the energy difference between the two spin states increases and a higher frequency (more energy) EM radiation needs to be applied to achieve a spin-flip (see image below).



Superconducting magnets can be used to produce very strong magnetic field, on the order of 21 tesla (T). Lower field strengths can also be used, in the range of 4 - 7 T. At these levels the energy required to bring the nuclei into resonance is in the MHz range and corresponds to radio wavelength energies, *i.e.* at a field strength of 4.7 T 200 MHz bring  $^1\text{H}$  nuclei into resonance and 50 MHz bring  $^{13}\text{C}$  into resonance. This is considerably less energy than is required for IR spectroscopy,  $\sim 10^{-4}$  kJ/mol versus  $\sim 5 - 50$  kJ/mol.

$^1\text{H}$  and  $^{13}\text{C}$  are not unique in their ability to undergo NMR. All nuclei with an odd number of protons ( $^1\text{H}$ ,  $^2\text{H}$ ,  $^{14}\text{N}$ ,  $^{19}\text{F}$ ,  $^{31}\text{P}$  ...) or nuclei with an odd number of neutrons (*i.e.*  $^{13}\text{C}$ ) show the magnetic properties required for NMR. Only nuclei with even number of both protons and neutrons ( $^{12}\text{C}$  and  $^{16}\text{O}$ ) do not have the required magnetic properties.

The basic arrangement of an NMR spectrometer is displayed below. A sample (in a small glass tube) is placed between the poles of a strong magnetic. A radio frequency generator pulses the sample and excites the nuclei causing a spin-flip. The spin flip is detected by the detector and the signal sent to a computer where it is processed.



### Exercise

1. If in a field strength of 4.7 T,  $\text{H}^1$  requires 200 MHz of energy to maintain resonance. If atom X requires 150 MHz, calculate the amount of energy required to spin flip atom X's nucleus. Is this amount greater than the energy required for hydrogen?
2. Calculate the energy required to spin flip at 400 MHz. Does changing the frequency to 500 MHz decrease or increase the energy required? What about 300 MHz.

### Answer

1.

$$E = h\nu$$

$$E = (6.62 \times 10^{-34})(150 \text{ MHz})$$

$$E = 9.93 \times 10^{-26} \text{ J}$$

The energy is equal to  $9.93 \times 10^{-26}$  J. This value is smaller than the energy required for hydrogen ( $1.324 \times 10^{-25}$  J).

2.

$$E = h\nu$$

$$E = (6.62 \times 10^{-34})(400 \text{ MHz})$$

$$E = 2.648 \times 10^{-25} \text{ J}$$

The energy would increase if the frequency would increase to 500 MHz, and decrease if the frequency would decrease to 300 MHz.

## CONTRIBUTORS AND ATTRIBUTIONS

- [Dr. Dietmar Kennepohl](#) FCIC (Professor of Chemistry, [Athabasca University](#))
- Prof. Steven Farmer ([Sonoma State University](#))
- [Dr. Richard Spinney](#) ([The Ohio State University](#))

---

12.1: Theory of Nuclear Magnetic Resonance (NMR) is shared under a [CC BY-NC-SA 4.0](#) license and was authored, remixed, and/or curated by LibreTexts.

## 12.2: NMR SPECTRA - AN INTRODUCTION AND OVERVIEW

### Objectives

After completing this section, you should be able to

1. explain, in general terms, the origin of shielding effects in NMR spectroscopy.
2. explain the number of peaks occurring in the  $^1\text{H}$  or  $^{13}\text{C}$  NMR spectrum of a simple compound, such as methyl acetate.
3. describe, and sketch a diagram of, a simple NMR spectrometer.
4. explain the difference in time scales of NMR and infrared spectroscopy.
5. predict the number of peaks expected in the  $^1\text{H}$  or  $^{13}\text{C}$  NMR spectrum of a given compound.

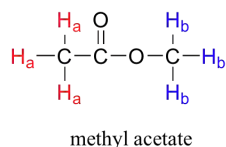
### Study Notes

Before you go on, make sure that you understand that each signal in the  $^1\text{H}$  NMR spectrum shown for methyl acetate is due to a different proton environment. The three protons on the same methyl group are equivalent and appear in the spectrum as one signal. However, the two methyl groups are in two different environments (one is more deshielded) and so we see two signals in the whole spectrum (aside from the TMS reference peak).

Methyl acetate has a very simple  $^1\text{H}$  NMR spectrum, because there is no proton-proton coupling, and therefore no splitting of the signals. In later sections, we discuss splitting patterns in  $^1\text{H}$  NMR spectra and how they help a chemist determine the structure of organic compounds.

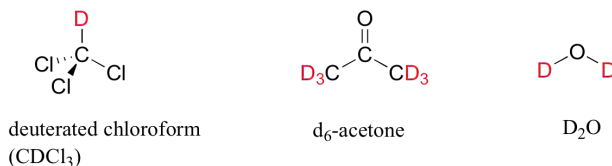
### THE BASICS OF AN NMR EXPERIMENT

Given that chemically nonequivalent protons have different resonance frequencies in the same applied magnetic field, we can see how NMR spectroscopy can provide us with useful information about the structure of an organic molecule. A full explanation of how a modern NMR instrument functions is beyond the scope of this text, but in very simple terms, here is what happens. First, a sample compound (we'll use methyl acetate) is placed inside a very strong applied magnetic field ( $B_0$ ).



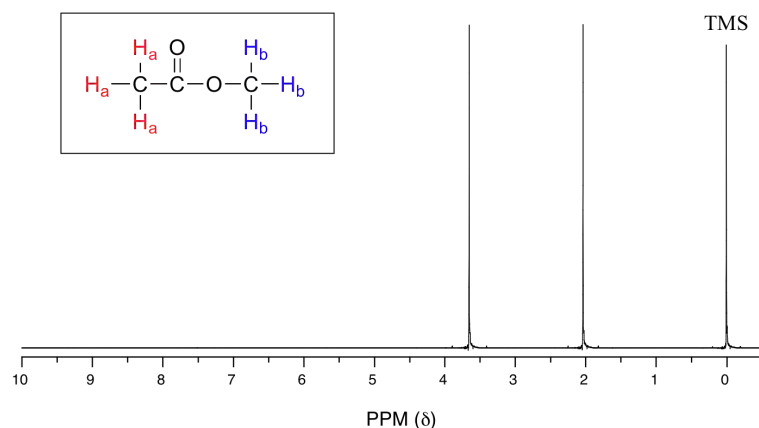
All of the protons begin to precess: the  $H_a$  protons at precessional frequency  $\omega_a$ , the  $H_b$  protons at  $\omega_b$ . At first, the magnetic moments of (slightly more than) half of the protons are aligned with  $B_0$ , and half are aligned against  $B_0$ . Then, the sample is hit with electromagnetic radiation in the radio frequency range. The two specific frequencies which match  $\omega_a$  and  $\omega_b$  (i.e. the resonance frequencies) cause those  $H_a$  and  $H_b$  protons which are aligned *with*  $B_0$  to 'flip' so that they are now aligned *against*  $B_0$ . In doing so, the protons absorb radiation at the two resonance frequencies. The NMR instrument records which frequencies were absorbed, as well as the intensity of each absorbance.

In most cases, a sample being analyzed by NMR is in solution. If we use a common laboratory solvent (diethyl ether, acetone, dichloromethane, ethanol, water, etc.) to dissolve our NMR sample, however, we run into a problem – there are many more solvent protons in solution than there are sample protons, so the signals from the sample protons will be overwhelmed. To get around this problem, we use special NMR solvents in which all protons have been replaced by deuterium. Recall that deuterium is NMR-active, but its resonance frequency is very different from that of protons, and thus it is 'invisible' in  $^1\text{H}$ -NMR. Some common NMR solvents are shown below.

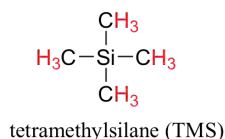


### THE CHEMICAL SHIFT

Let's look at an actual  $^1\text{H}$ -NMR plot for methyl acetate. Just as in IR and UV-vis spectroscopy, the vertical axis corresponds to intensity of absorbance, the horizontal axis to frequency (typically the vertical axis is not shown in an NMR spectrum).



We see three absorbance signals: two of these correspond to  $H_a$  and  $H_b$ , while the peak at the far right of the spectrum corresponds to the 12 chemically equivalent protons in tetramethylsilane (TMS), a standard reference compound that was added to our sample.



You may be wondering about a few things at this point - why is TMS necessary, and what is the meaning of the 'ppm ( $\delta$ )' label on the horizontal axis? Shouldn't the frequency units be in Hz? Keep in mind that NMR instruments of many different applied field strengths are used in organic chemistry laboratories, and that the proton's resonance frequency range depends on the strength of the applied field. The spectrum above was generated on an instrument with an applied field of approximately 7.1 Tesla, at which strength protons resonate in the neighborhood of 300 million Hz (chemists refer to this as a 300 MHz instrument). If our colleague in another lab takes the NMR spectrum of the same molecule using an instrument with a 2.4 Tesla magnet, the protons will resonate at around 100 million Hz (so we'd call this a 100 MHz instrument). It would be inconvenient and confusing to always have to convert NMR data according to the field strength of the instrument used. Therefore, chemists report resonance frequencies not as absolute values in Hz, but rather as values *relative to a common standard*, generally the signal generated by the protons in TMS. This is where the ppm - parts per million - term comes in. Regardless of the magnetic field strength of the instrument being used, the resonance frequency of the 12 equivalent protons in TMS is defined as a zero point. The resonance frequencies of protons in the sample molecule are then reported in terms of how much higher they are, in ppm, relative to the TMS signal (almost all protons in organic molecules have a higher resonance frequency than those in TMS, for reasons we shall explore quite soon).

The two proton groups in our methyl acetate sample are recorded as resonating at frequencies 2.05 and 3.67 ppm higher than TMS. One-millionth (1.0 ppm) of 300 MHz is 300 Hz. Thus 2.05 ppm, on this instrument, corresponds to 615 Hz, and 3.67 ppm corresponds to 1101 Hz. If the TMS protons observed by our 7.1 Tesla instrument resonate at exactly 300,000,000 Hz, this means that the protons in our ethyl acetate samples are resonating at 300,000,615 and 300,001,101 Hz, respectively. Likewise, if the TMS protons in our colleague's 2.4 Tesla instrument resonate at exactly 100 MHz, the methyl acetate protons in her sample resonate at 100,000,205 and 100,000,367 Hz (on the 100 MHz instrument, 1.0 ppm corresponds to 100 Hz). The absolute frequency values in each case are not very useful - they will vary according to the instrument used - but the *difference* in resonance frequency from the TMS standard, expressed in parts per million, should be the same regardless of the instrument.

Expressed this way, the resonance frequency for a given proton in a molecule is called its **chemical shift**. A frequently used symbolic designation for chemical shift in ppm is the lower-case Greek letter *delta* ( $\delta$ ). Most protons in organic compounds have chemical shift values between 0 and 12 ppm from TMS, although values below zero and above 12 are occasionally observed. By convention, the left-hand side of an NMR spectrum (higher chemical shift) is called **downfield**, and the right-hand direction is called **upfield**.

In our methyl acetate example we included for illustrative purposes a small amount of TMS standard directly in the sample, as was the common procedure for determining the zero point with older NMR instruments. That practice is generally no longer necessary, as modern NMR instruments are designed to use the deuterium signal from the solvent as a standard reference point, then to extrapolate the 0 ppm baseline that corresponds to the TMS proton signal (in an applied field of 7.1 Tesla, the deuterium atom in  $\text{CDCl}_3$  resonates at 32 MHz, compared to 300 MHz for the protons in TMS). In the remaining NMR spectra that we will see in this text we will not see an actual TMS signal, but we can always assume that the 0 ppm point corresponds to where the TMS protons *would* resonate if they were present.



### Example

A proton has a chemical shift (relative to TMS) of 4.56 ppm.

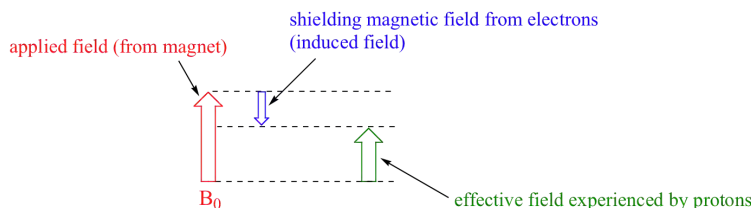
- What is its chemical shift, expressed in Hz, in a 300 MHz instrument? On a 200 MHz instrument?
- What is its resonance frequency, expressed in Hz, in a 300 MHz instrument? On a 200 MHz instrument?

(Assume that in these instruments, the TMS protons resonate at exactly 300 or 200 MHz, respectively)

Solution

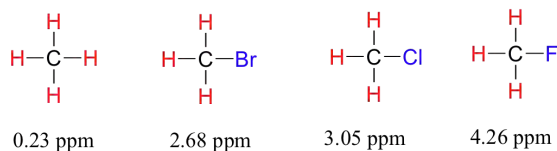
### DIAMAGNETIC SHIELDING AND DESHIELDING

We come now to the question of *why* nonequivalent protons have different chemical shifts. The chemical shift of a given proton is determined primarily by its immediate electronic environment. Consider the methane molecule ( $\text{CH}_4$ ), in which the protons have a chemical shift of 0.23 ppm. The valence electrons around the methyl carbon, when subjected to  $B_0$ , are induced to circulate and thus generate their own very small magnetic field that *opposes*  $B_0$ . This **induced field**, to a small but significant degree, *shields* the nearby protons from experiencing the full force of  $B_0$ , an effect known as **local diamagnetic shielding**. The methane protons therefore do not experience the full force of  $B_0$  - what they experience is called  $B_{\text{eff}}$ , or the **effective field**, which is slightly *weaker* than  $B_0$ .

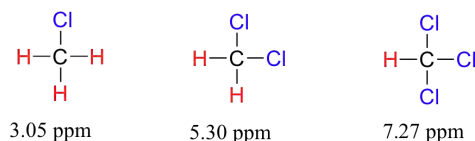


Therefore, their resonance frequency is slightly lower than what it would be if they did not have electrons nearby to shield them.

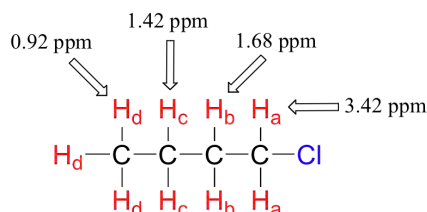
Now consider methyl fluoride,  $\text{CH}_3\text{F}$ , in which the protons have a chemical shift of 4.26 ppm, significantly higher than that of methane. This is caused by something called the **deshielding effect**. Because fluorine is more electronegative than carbon, it pulls valence electrons away from the carbon, effectively *decreasing* the electron density around each of the protons. For the protons, lower electron density means less diamagnetic shielding, which in turn means a greater overall exposure to  $B_0$ , a stronger  $B_{\text{eff}}$ , and a higher resonance frequency. Put another way, the fluorine, by pulling electron density away from the protons, is *deshielding* them, leaving them more exposed to  $B_0$ . As the electronegativity of the substituent increases, so does the extent of deshielding, and so does the chemical shift. This is evident when we look at the chemical shifts of methane and three halomethane compounds (remember that electronegativity increases as we move up a column in the periodic table).



To a large extent, then, we can predict trends in chemical shift by considering how much deshielding is taking place near a proton. The chemical shift of trichloromethane is, as expected, higher than that of dichloromethane, which is in turn higher than that of chloromethane.



The deshielding effect of an electronegative substituent diminishes sharply with increasing distance:



The presence of an electronegative oxygen, nitrogen, sulfur, or  $\text{sp}^2$ -hybridized carbon also tends to shift the NMR signals of nearby protons slightly downfield:

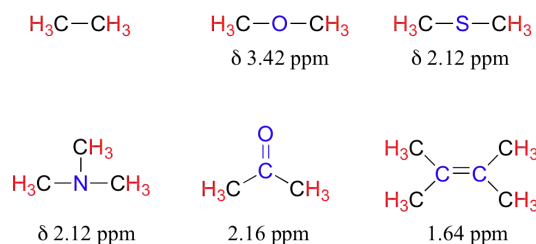
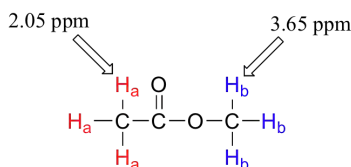
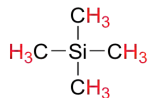


Table 2 lists typical chemical shift values for protons in different chemical environments.

Armed with this information, we can finally assign the two peaks in the the  $^1\text{H}$ -NMR spectrum of methyl acetate that we saw a few pages back. The signal at 3.65 ppm corresponds to the methyl ester protons ( $\text{H}_b$ ), which are deshielded by the adjacent oxygen atom. The upfield signal at 2.05 ppm corresponds to the acetate protons ( $\text{H}_a$ ), which is deshielded - but to a lesser extent - by the adjacent carbonyl group.



Finally, a note on the use of TMS as a standard in NMR spectroscopy: one of the main reasons why the TMS proton signal was chosen as a zero-point is that the TMS protons are highly shielded: silicon is slightly *less* electronegative than carbon, and therefore *donates* some additional shielding electron density. Very few organic molecules contain protons with chemical shifts that are negative relative to TMS.

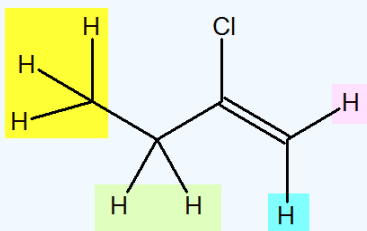


### Exercise

3. 2-chlorobutene shows 4 different hydrogen signals. Explain why this is.

#### Answer

3. The same colors represent the same signal. 4 different colors for 4 different signals. The hydrogen on the alkene would give two different signals.



### CONTRIBUTORS AND ATTRIBUTIONS

- Dr. Dietmar Kennepohl FCIC (Professor of Chemistry, [Athabasca University](#))
- Prof. Steven Farmer ([Sonoma State University](#))
- [Organic Chemistry With a Biological Emphasis](#) by Tim Soderberg (University of Minnesota, Morris)

12.2: NMR Spectra - an introduction and overview is shared under a [CC BY-NC-SA 4.0](#) license and was authored, remixed, and/or curated by LibreTexts.

## 12.3: CHEMICAL SHIFTS AND SHIELDING

### Objectives

After completing this section, you should be able to

1. describe the delta scale used in NMR spectroscopy.
2. perform calculations based on the relationship between the delta value (in ppm), the observed chemical shift (in Hz), and the operating frequency of an NMR spectrometer (in Hz).

### Key Terms

Make certain that you can define, and use in context, the key terms below.

- chemical shift
- delta scale
- upfield/downfield

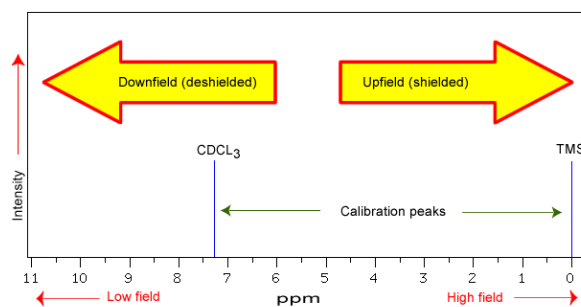
### Study Notes

Although the calculations described in this section will help you understand the principles of NMR, it is the actual delta values, not the calculations, which are of greatest importance to the beginning organic chemist. Thus, we shall try to focus on the interpretation of NMR spectra, not the mathematical aspects of the technique.

In Section 13.9 we discuss  $^1\text{H}$  NMR chemical shifts in more detail. Although you will eventually be expected to associate the approximate region of a  $^1\text{H}$  NMR spectrum with a particular type of proton, you are expected to use a general table of  $^1\text{H}$  NMR chemical shifts such as the one shown in Section 13.9.

### CHEMICAL SHIFTS

The NMR spectra is displayed as a plot of the applied radio frequency versus the absorption. The applied frequency increases from left to right, thus the left side of the plot is the low field, downfield or deshielded side and the right side of the plot is the high field, upfield or shielded side (see the figure below). The concept of shielding will be explained shortly.



The position on the plot at which the nuclei absorbs is called the **chemical shift**. Since this has an arbitrary value a standard reference point must be used. The two most common standards are TMS (tetramethylsilane,  $\text{Si}(\text{CH}_3)_4$ ) which has been assigned a chemical shift of zero, and  $\text{CDCl}_3$  (deuteriochloroform) which has a chemical shift of 7.26 for  $^1\text{H}$  NMR and 77 for  $^{13}\text{C}$  NMR. The scale is commonly expressed as parts per million (ppm) which is independent of the spectrometer frequency. The scale is the **delta ( $\delta$ ) scale**.

$$\delta = \frac{\text{frequency of signal} - \text{frequency of standard}}{\text{spectrometer frequency}} \times 10^6$$

The range at which most NMR absorptions occur is quite narrow. Almost all  $^1\text{H}$  absorptions occur downfield within 10 ppm of TMS. For  $^{13}\text{C}$  NMR almost all absorptions occurs within 220 ppm downfield of the C atom in TMS.

### SHIELDING IN NMR

Structural features of the molecule will have an effect on the exact magnitude of the magnetic field experienced by a particular nucleus. This means that H atoms which have different chemical environments will have different chemical shifts. This is what makes NMR so useful for structure determination in organic chemistry. There are three main features that will affect the shielding of the nucleus, electronegativity, magnetic anisotropy of  $\pi$  systems and hydrogen bonding.

### ELECTRONEGATIVITY

The electrons that surround the nucleus are in motion so they created their own electromagnetic field. This field opposes the the applied magnetic field and so reduces the field experienced by the nucleus. Thus the electrons are said to **shield** the nucleus. Since the magnetic field experienced at the nucleus defines the energy difference between spin states it also defines what the chemical shift will be for that nucleus. Electron with-drawing groups can decrease the electron density at the nucleus, deshielding the nucleus and result in a larger chemical shift. Compare the data in the table below.

Compound, $\text{CH}_3\text{X}$	$\text{CH}_3\text{F}$	$\text{CH}_3\text{OH}$	$\text{CH}_3\text{Cl}$	$\text{CH}_3\text{Br}$	$\text{CH}_3\text{I}$	$\text{CH}_4$	$(\text{CH}_3)_4\text{Si}$
Electronegativity of X	4.0	3.5	3.1	2.8	2.5	2.1	1.8
Chemical shift $\delta$ (ppm)	4.26	3.4	3.05	2.68	2.16	0.23	0

As can be seen from the data, as the electronegativity of X increases the chemical shift,  $\delta$  increases. This is an effect of the halide atom pulling the electron density away from the methyl group. This exposes the nuclei of both the C and H atoms, "deshielding" the nuclei and shifting the peak downfield.

The effects are cumulative so the presence of more electron withdrawing groups will produce a greater deshielding and therefore a larger chemical shift, *i.e.*

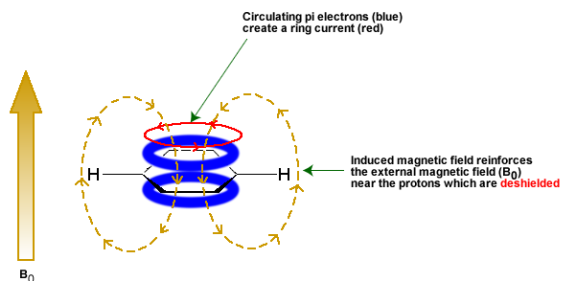
Compound	$\text{CH}_4$	$\text{CH}_3\text{Cl}$	$\text{CH}_2\text{Cl}_2$	$\text{CHCl}_3$
$\delta$ (ppm)	0.23	3.05	5.30	7.27

These **inductive effects** are not only felt by the immediately adjacent atoms, but the deshielding can occur further down the chain, *i.e.*

NMR signal	$-\text{CH}_2-\text{CH}_2-\text{CH}_2\text{Br}$
$\delta$ (ppm)	1.25 1.69 3.30

## MAGNETIC ANISOTROPY: PI ELECTRON EFFECTS

The  $\pi$  electrons in a compound, when placed in a magnetic field, will move and generate their own magnetic field. The new magnetic field will have an effect on the shielding of atoms within the field. The best example of this is benzene (see the figure below).

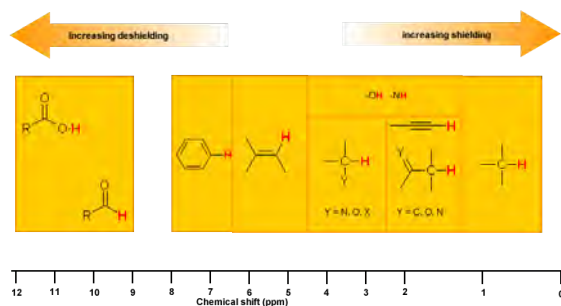


This effect is common for any atoms near a  $\pi$  bond, i.e.

Proton Type	Effect	Chemical shift (ppm)
$C_6H_5-H$	highly deshielded	6.5 - 8
$C=C-H$	deshielded	4.5 - 6
$C\equiv C-H$	shielded*	~2.5
$O=C-H$	very highly deshielded	9 - 10
* the acetylene H is shielded due to its location relative to the $\pi$ system		

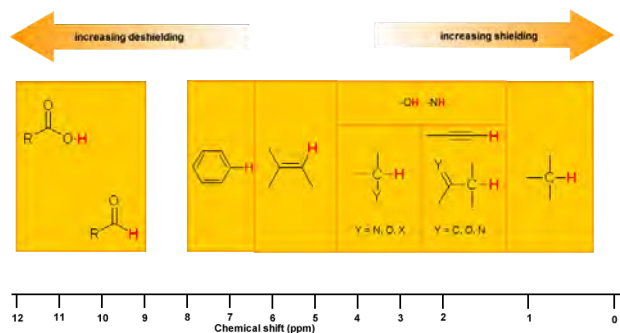
## HYDROGEN BONDING

Protons that are involved in hydrogen bonding (i.e. -OH or -NH) are usually observed over a wide range of chemical shifts. This is due to the deshielding that occurs in the hydrogen bond. Since hydrogen bonds are dynamic, constantly forming, breaking and forming again, there will be a wide range of hydrogen bonds strengths and consequently a wide range of deshielding. This as well as solvation effects, acidity, concentration and temperature make it very difficult to predict the chemical shifts for these atoms.



Experimentally -OH and -NH can be identified by carrying out a simple  $D_2O$  exchange experiment since these protons are exchangeable.

- run the normal H-NMR experiment on your sample
- add a few drops of  $D_2O$
- re-run the H-NMR experiment
- compare the two spectra and look for peaks that have "disappeared"



**Exercise**

4. The following peaks were from a  $\text{H}^1$  NMR spectra from a 400 MHz spectrometer. Convert to  $\delta$  units
- A.  $\text{CHCl}_3$  1451 Hz
  - B.  $\text{CH}_3\text{Cl}$  610 Hz
  - C.  $\text{CH}_3\text{OH}$  693 Hz
  - D.  $\text{CH}_2\text{Cl}_2$  1060 Hz
5. Butan-2-one shows a chemical shift around 2.1 on a 300 MHz spectrometer in the  $\text{H}^1$  NMR spectrum.
- A. How far downfield is this peak from TMS in Hz?
  - B. If the spectrum was done with a 400 MHz instrument, would a different chemical shift be seen?
  - C. On this new 400 MHz spectrum, what would be the difference in Hz from the chemical shift and TMS?

**Answer**

- 4.
- A. 3.627 ppm
  - B. 1.525 ppm
  - C. 1.732 ppm
  - D. 2.65 ppm
- 5.
- A. Since TMS is at  $0\delta = 0$  Hz for reference, the difference between the two would be 630 Hz
  - B. No not a different chemical shift, but a different frequency would be seen, 840 Hz
  - C. 840 Hz

**CONTRIBUTORS AND ATTRIBUTIONS**

- [Dr. Dietmar Kennepohl](#) FCIC (Professor of Chemistry, [Athabasca University](#))
- Prof. Steven Farmer ([Sonoma State University](#))
- [Dr. Richard Spinney](#) ([The Ohio State University](#))

12.3: Chemical Shifts and Shielding is shared under a [CC BY-NC-SA 4.0](#) license and was authored, remixed, and/or curated by LibreTexts.

## 12.4: $^1\text{H}$ NMR SPECTROSCOPY AND PROTON EQUIVALENCE

### Objectives

After completing this section, you should be able to

1. identify those protons which are equivalent in a given chemical structure.
2. use the  $^1\text{H}$  NMR spectrum of a simple organic compound to determine the number of equivalent sets of protons present.

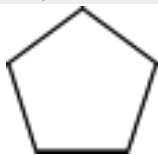

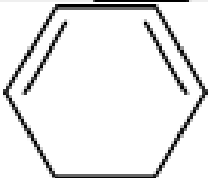
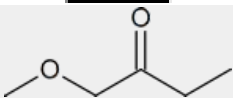
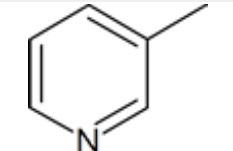
### Key Terms

Make certain that you can define, and use in context, the key terms below.

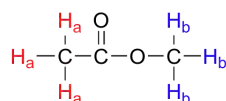
- diastereotopic
- enantiotopic
- homotopic

### Study Notes

It is important at this stage to be able to identify equivalent protons in any organic compound given the structure of that compound. Once you know the number of different groups of equivalent protons in a compound, you can predict the number (before coupling) and relative strength of signals. Look at the following examples and make sure you understand how the number and intensity ratio of signals are derived from the structure shown.

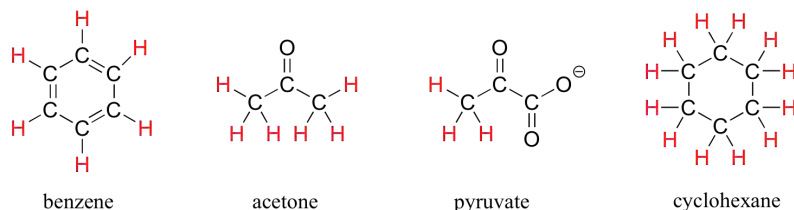
Structure	Number of Signals	Ratio of Signals
<chem>CH3OCH2CH2Br</chem>	3	A : B : C      3 : 2 : 2
	1	
	3	A : B : C      2 : 2 : 6 (or 1 : 1 : 3)
	3	A : B : C      2 : 4 : 2 (or 1 : 2 : 1)
	4	A : B : C : D      3 : 2 : 2 : 3
	5	A : B : C : D : E      3 : 1 : 1 : 1 : 1

If all protons in all organic molecules had the same resonance frequency in an external magnetic field of a given strength, the information in the previous paragraph would be interesting from a theoretical standpoint, but would not be terribly useful to organic chemists. Fortunately for us, however, resonance frequencies are not uniform for all protons in a molecule. *In an external magnetic field of a given strength, protons in different locations in a molecule have different resonance frequencies, because they are in non-identical electronic environments.* In methyl acetate, for example, there are two 'sets' of protons. The three protons labeled  $\text{H}_a$  have a different - and easily distinguishable - resonance frequency than the three  $\text{H}_b$  protons, because the two sets of protons are in non-identical environments: they are, in other words, chemically nonequivalent.



On the other hand, the three  $H_a$  protons are all in the same electronic environment, and are chemically equivalent to one another. They have identical resonance frequencies. The same can be said for the three  $H_b$  protons.

The ability to recognize chemical equivalency and nonequivalency among atoms in a molecule will be central to understanding NMR. In each of the molecules below, all protons are chemically equivalent, and therefore will have the same resonance frequency in an NMR experiment.



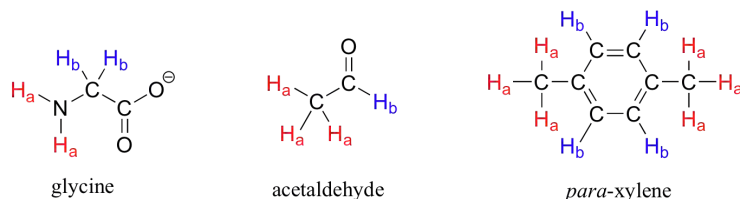
You might expect that the equatorial and axial hydrogens in cyclohexane would be non-equivalent, and would have different resonance frequencies. In fact, an axial hydrogen *is* in a different electronic environment than an equatorial hydrogen. Remember, though, that the molecule rotates rapidly between its two chair conformations, meaning that any given hydrogen is rapidly moving back and forth between equatorial and axial positions. It turns out that, except at extremely low temperatures, this rotational motion occurs on a time scale that is much faster than the time scale of an NMR experiment.



ring-flip process is *fast* compared to the NMR time-scale

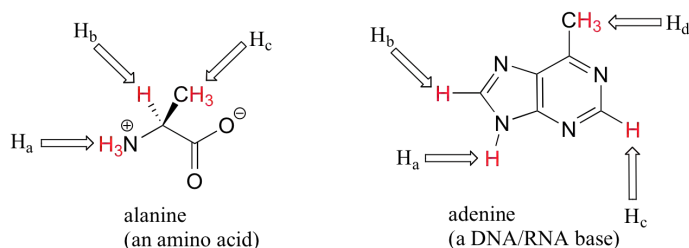
In this sense, NMR is like a camera that takes photographs of a rapidly moving object with a slow shutter speed - the result is a blurred image. In NMR terms, this means that all 12 protons in cyclohexane are equivalent.

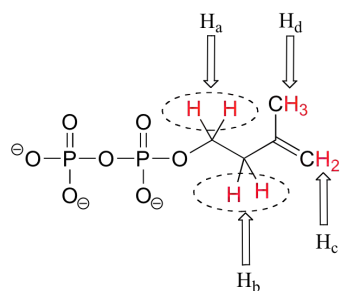
Each the molecules in the next figure contains *two* sets of protons, just like our previous example of methyl acetate, and again in each case the resonance frequency of the  $H_a$  protons will be different from that of the  $H_b$  protons.



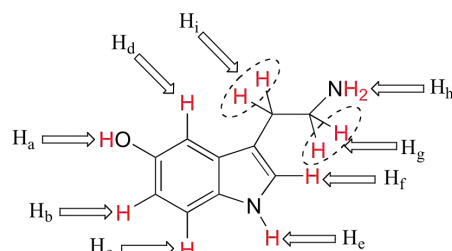
Notice how the symmetry of *para*-xylene results in there being only two different sets of protons.

Most organic molecules have several sets of protons in different chemical environments, and each set, in theory, will have a different resonance frequency in  $^1\text{H}$ -NMR spectroscopy.



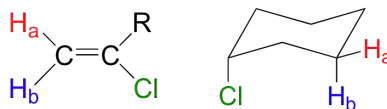


isopentenyl diphosphate  
(a lipid building block)

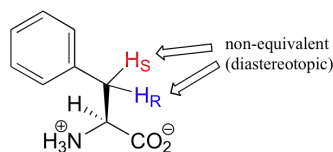


serotonin (a neurotransmitter)

When stereochemistry is taken into account, the issue of equivalence vs nonequivalence in NMR starts to get a little more complicated. It should be fairly intuitive that hydrogens on different sides of asymmetric ring structures and double bonds are in different electronic environments, and thus are non-equivalent and have different resonance frequencies. In the alkene and cyclohexene structures below, for example,  $H_a$  is *trans* to the chlorine substituent, while  $H_b$  is *cis* to chlorine.

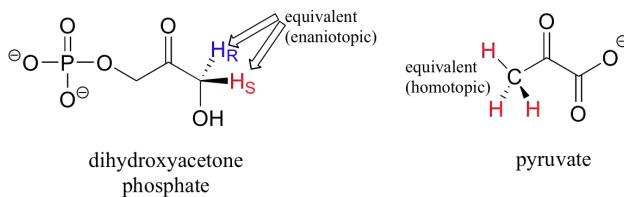


What is not so intuitive is that diastereotopic hydrogens (section 3.10) on chiral molecules are also non-equivalent:



phenylalanine

However, enantiotopic and homotopic hydrogens are chemically equivalent.

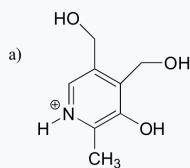


dihydroxyacetone  
phosphate

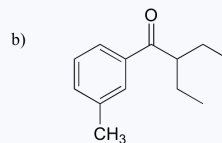
pyruvate

### Example

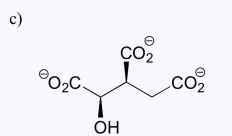
How many different sets of protons do the following molecules contain? (count diastereotopic protons as non-equivalent).



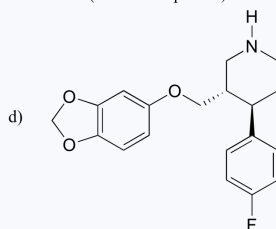
pyridoxine  
(vitamin B<sub>6</sub>)



DEET  
(an insect repellent)



isocitrate  
(a citric acid cycle intermediate)



paroxetine  
(an anti-anxiety drug, trade name Paxil)

Solution



### Exercise

6. How many non-equivalent hydrogen are in the following molecules; how many different signals will you see in a  $H^1$  NMR spectrum.

- A.  $CH_3CH_2CH_2Br$
- B.  $CH_3OCH_2C(CH_3)_3$
- C. Ethyl Benzene
- D. 2-methyl-1-hexene

### Answer

6. A. 3; B. 3; C. 5; D. 7

## CONTRIBUTORS AND ATTRIBUTIONS

- [Dr. Dietmar Kennepohl](#) FCIC (Professor of Chemistry, [Athabasca University](#))
- Prof. Steven Farmer ([Sonoma State University](#))
- [Organic Chemistry With a Biological Emphasis](#) by [Tim Soderberg](#) (University of Minnesota, Morris)

12.4:  $H^1$  NMR Spectroscopy and Proton Equivalence is shared under a [CC BY-NC-SA 4.0](#) license and was authored, remixed, and/or curated by LibreTexts.

## 12.5: FUNCTIONAL GROUPS AND CHEMICAL SHIFTS IN $^1\text{H}$ NMR SPECTROSCOPY

### Objectives

After completing this section, you should be able to

1. state the approximate chemical shift ( $\delta$ ) for the following types of protons:
  1. aromatic.
  2. vinylic.
  3. those bonded to carbon atoms which are in turn bonded to a highly electronegative element.
  4. those bonded to carbons which are next to unsaturated centres.
  5. those bonded to carbons which are part of a saturated system.
2. predict the approximate chemical shifts of each of the protons in an organic compound, given its structure and a table of chemical shift correlations.

### Study Notes

You should not attempt to memorize the chemical shifts listed in the table of this section, although it is probable that you will need to refer to it quite frequently throughout the remainder of this course. To fulfil Objective 1, above, you should be familiar with the information presented in the figure of chemical shift ranges for organic compounds. If you have an approximate idea of the chemical shifts of some of the most common types of protons, you will find the interpretation of  $^1\text{H}$  NMR spectra less arduous than it might otherwise be. Notice that we shall not try to understand why aromatic protons are deshielded or why alkynyl protons are not deshielded as much as vinylic protons. These phenomena can be explained, but the focus is on the interpretation of  $^1\text{H}$  NMR spectra, not on the underlying theory.

### 1 $^1\text{H}$ NMR CHEMICAL SHIFTS

Chemical shift is associated with the Larmor frequency of a nuclear spin to its chemical environment. Tetramethylsilane[TMS;  $(\text{CH}_3)_4\text{Si}$ ] is generally used for standard to determine chemical shift of compounds:  $\delta_{\text{TMS}}=0\text{ppm}$ . In other words, frequencies for chemicals are measured for a  $^1\text{H}$  or  $^{13}\text{C}$  nucleus of a sample from the  $^1\text{H}$  or  $^{13}\text{C}$  resonance of TMS. It is important to understand trend of chemical shift in terms of NMR interpretation. The proton NMR chemical shift is affected by nearness to electronegative atoms (O, N, halogen.) and unsaturated groups ( $\text{C}=\text{C}$ ,  $\text{C}=\text{O}$ , aromatic). Electronegative groups move to the down field (left; increase in ppm). Unsaturated groups shift to downfield (left) when affecting nucleus is in the plane of the unsaturation, but reverse shift takes place in the regions above and below this plane.  $^1\text{H}$  chemical shift play a role in identifying many functional groups. Figure 1. indicates important example to figure out the functional groups.

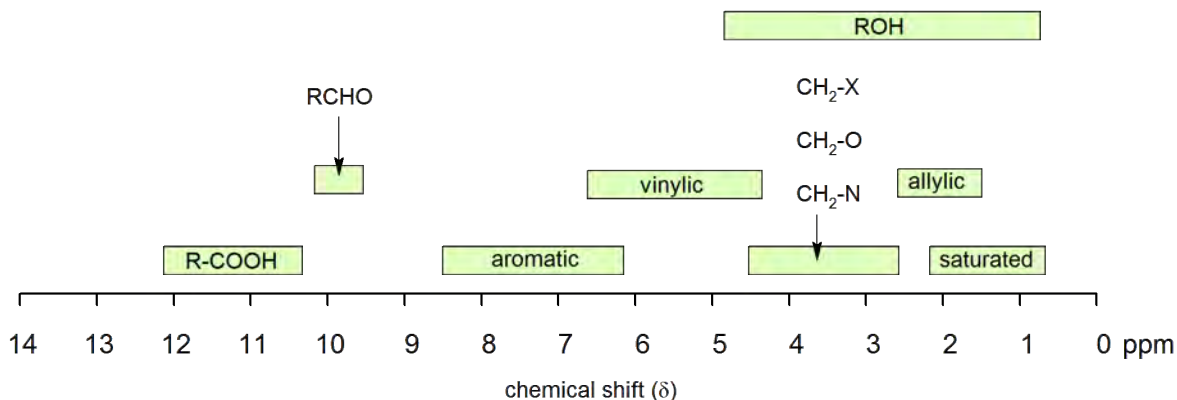


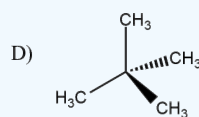
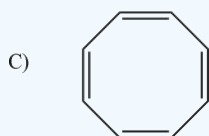
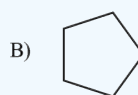
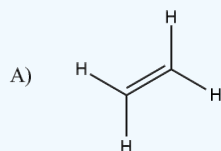
Figure 1.  $^1\text{H}$  chemical shift ranges for organic compounds

Chemical shift values are in parts per million (ppm) relative to tetramethylsilane.

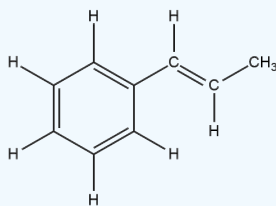
Hydrogen type	Chemical shift (ppm)
$\text{RC}\underline{\text{H}}_3$	0.9 - 1.0
$\text{RC}\underline{\text{H}}_2\text{R}$	1.2 - 1.7
$\text{R}_3\text{C}\underline{\text{H}}$	1.5 - 2.0
	2.0 - 2.3
$\begin{array}{c} \text{R} \quad \text{CH}_3 \\ \diagdown \quad / \\ \text{C} = \text{C} \\ / \quad \diagdown \\ \text{R} \quad \text{R} \end{array}$	1.5 - 1.8
$\text{RNH}_2$	1 - 3
$\text{Ar}\underline{\text{CH}}_3$	2.2 - 2.4
$\text{R}-\text{C}\equiv\text{C}-\underline{\text{H}}$	2.3 - 3.0
$\text{ROCH}_3$	3.7 - 3.9
$\begin{array}{c} \text{O} \\    \\ \text{R}-\text{C}-\text{O}-\text{CH}_3 \end{array}$	3.7 - 3.9
$\text{ROH}$	1 - 5
$\begin{array}{c} \text{R} \quad \text{H} \\ \diagdown \quad / \\ \text{C} = \text{C} \\ / \quad \diagdown \\ \text{R} \quad \text{R} \end{array}$	3.7 - 6.5
$\begin{array}{c} \text{O} \\    \\ \text{R}-\text{C}-\text{N}-\text{R} \\   \\ \text{H} \end{array}$	5 - 9
$\text{Ar}\underline{\text{H}}$	6.0 - 8.7
$\begin{array}{c} \text{O} \\    \\ \text{R}-\text{C}-\text{H} \end{array}$	9.5 - 10.0
$\begin{array}{c} \text{O} \\    \\ \text{R}-\text{C}-\text{OH} \end{array}$	10 - 13

### Exercise

7. The following have one  $\text{H}^1$  NMR peak. In each case predict approximately where this peak would be in a spectra.



8. Identify the different equivalent protons in the following molecule and predict their expected chemical shift.

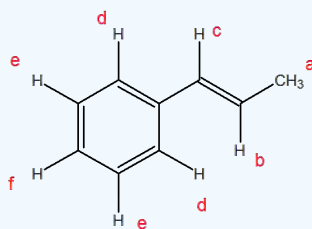


**Answer**

7. A. 5.20  $\delta$ ; B. 1.50  $\delta$ ; C. 6.40  $\delta$ ; D. 1.00  $\delta$

8. There are 6 different protons in this molecule

The shifts are (close) to the following: (a) 2  $\delta$ ; (b) 6  $\delta$ ; (c) 6.5  $\delta$ ; (d) 7  $\delta$ ; (e) 7.5  $\delta$ ; (f) 7  $\delta$



## CONTRIBUTORS AND ATTRIBUTIONS

- Dr. Dietmar Kennepohl FCIC (Professor of Chemistry, [Athabasca University](#))
- Prof. Steven Farmer ([Sonoma State University](#))
- [Organic Chemistry With a Biological Emphasis](#) by Tim Soderberg (University of Minnesota, Morris)

12.5: Functional Groups and Chemical Shifts in  $^1\text{H}$  NMR Spectroscopy is shared under a [CC BY-NC-SA 4.0](#) license and was authored, remixed, and/or curated by LibreTexts.

## 12.6: INTEGRATION OF $^1\text{H}$ NMR ABSORPTIONS- PROTON COUNTING

### Objectives

After completing this section, you should be able to

1. explain what information can be obtained from an integrated  $^1\text{H}$  NMR spectrum, and use this information in the interpretation of such a spectrum.
2. use an integrated  $^1\text{H}$  NMR spectrum to determine the ratio of the different types of protons present in an organic compound.

### Study Notes

The concept of peak integration is that the area of a given peak in a  $^1\text{H}$  NMR spectrum is proportional to the number of (equivalent) protons giving rise to the peak. Thus, a peak which is caused by a single, unique proton has an area which measures one third of the area of a peak resulting from a methyl ( $\text{CH}_3$ ) group in the same spectrum.

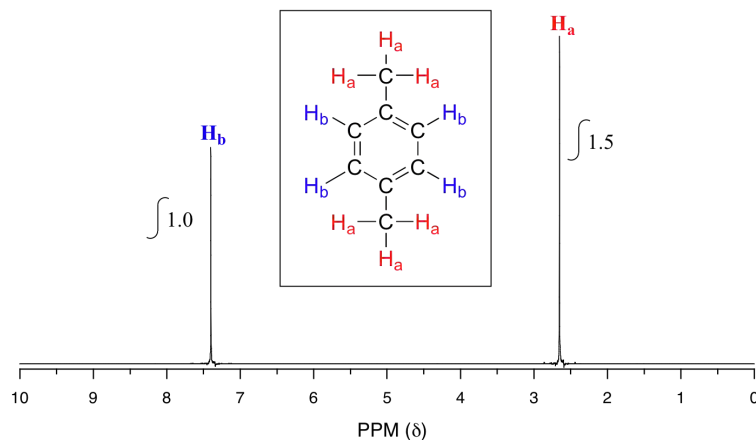
In practice, we do not have to measure these areas ourselves: it is all done electronically by the spectrometer, and an integration curve is superimposed on the rest of the spectrum. The integration curve appears as a series of steps, with the height of each step being proportional to the area of the corresponding absorption peak, and consequently, to the number of protons responsible for the absorption.

As it can be difficult to decide precisely where to start and stop when measuring integrations, you should not expect your ratios to be exact whole numbers.

### SIGNAL INTEGRATION

The computer in an NMR instrument can be instructed to automatically integrate the area under a signal or group of signals. This is very useful, because *in  $^1\text{H}$ -NMR spectroscopy the area under a signal is proportional to the number of hydrogens to which the peak corresponds*. The two signals in the methyl acetate spectrum, for example, integrate to approximately the same area, because they both correspond to a set of three equivalent protons.

Take a look next at the spectrum of *para*-xylene (IUPAC name 1,4-dimethylbenzene):



This molecule has two sets of protons: the six methyl ( $\text{H}_a$ ) protons and the four aromatic ( $\text{H}_b$ ) protons. When we instruct the instrument to integrate the areas under the two signals, we find that the area under the peak at 2.6 ppm is 1.5 times greater than the area under the peak at 7.4 ppm. This (along with the actual chemical shift values, which we'll discuss soon) tells us which set of protons corresponds to which NMR signal.

The integration function can also be used to determine the relative amounts of two or more compounds in a *mixed* sample. If we have a sample that is a 50:50 (mole/mole) mixture of benzene and acetone, for example, the acetone signal should integrate to the same value as the benzene sample, because both signals represent six equivalent protons. If we have a 50:50 mixture of acetone and cyclopentane, on the other hand, the ratio of the acetone peak area to the cyclopentane peak area will be 3:5 (or 6:10), because the cyclopentane signal represents ten protons.

### Example 12.6.1

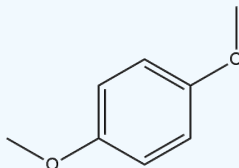
You take a  $^1\text{H}$ -NMR spectrum of a mixed sample of acetone ( $\text{CH}_3(\text{CO})\text{CH}_3$ ) and dichloromethane ( $\text{CH}_2\text{Cl}_2$ ). The integral ratio of the two signals (acetone : dichloromethane) is 2.3 to 1. What is the molar ratio of the two compounds in the sample?

### Example 12.6.2

You take the  $^1\text{H}$ -NMR spectrum of a mixed sample of 36% *para*-xylene and 64% acetone in  $\text{CDCl}_3$  solvent (structures are shown earlier in this chapter). How many peaks do you expect to see? What is the expected ratio of integration values for these peaks? (set the acetone peak integration equal to 1.0)

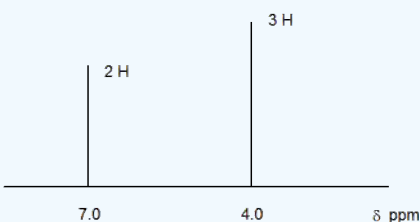
### Exercise

9. Predict how many signals the following molecule would have? Sketch the spectra and estimate the integration of the peaks.



### Answer

9. There will be two peaks. Ideal general spectrum shown with integration.



## CONTRIBUTORS AND ATTRIBUTIONS

- Dr. Dietmar Kennepohl FCIC (Professor of Chemistry, [Athabasca University](#))
- Prof. Steven Farmer ([Sonoma State University](#))
- [Organic Chemistry With a Biological Emphasis](#) by Tim Soderberg (University of Minnesota, Morris)

12.6: Integration of  $^1\text{H}$  NMR Absorptions- Proton Counting is shared under a [CC BY-NC-SA 4.0](#) license and was authored, remixed, and/or curated by LibreTexts.

## 12.7: SPIN-SPIN SPLITTING IN $^1\text{H}$ NMR SPECTRA

### Objectives

After completing this section, you should be able to

1. explain the spin-spin splitting pattern observed in the  $^1\text{H}$  NMR spectrum of a simple organic compound, such as chloroethane or 2-bromopropane.
2. interpret the splitting pattern of a given  $^1\text{H}$  NMR spectrum.
3. determine the structure of a relatively simple organic compound, given its  $^1\text{H}$  NMR spectrum and other relevant information.
4. use coupling constants to determine which groups of protons are coupling with one another in a  $^1\text{H}$  NMR spectrum.
5. predict the splitting pattern which should be observed in the  $^1\text{H}$  NMR spectrum of a given organic compound.

### Key Terms

Make certain that you can define, and use in context, the key terms below.

- coupling constant
- multiplet
- quartet
- triplet
- doublet

### Study Notes

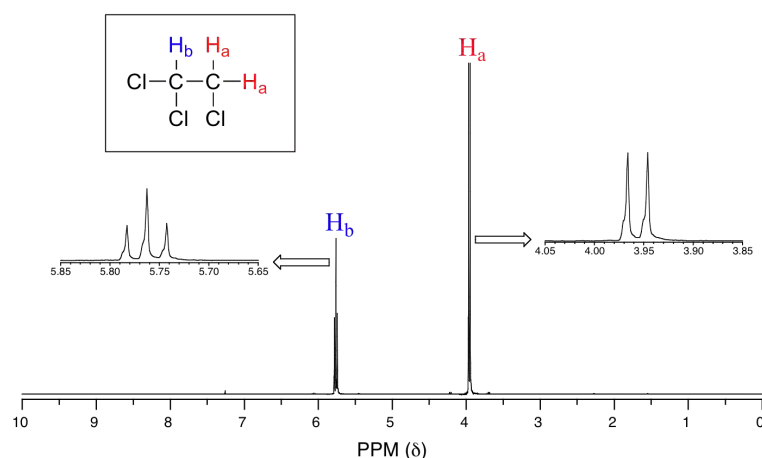
From what we have learned about  $^1\text{H}$  NMR spectra so far, we might predict that the spectrum of 1,1,2-trichloroethane,  $\text{CHCl}_2\text{CH}_2\text{Cl}$ , would consist of two peaks—one, at about 2.5–4.0  $\delta$ , expected for  $\text{CH}_2$ -halogen compounds and one shifted downfield because of the presence of an additional electronegative chlorine atom on the second carbon. However, when we look at the spectrum it appears to be much more complex. True, we see absorptions in the regions we predicted, but these absorptions appear as a group of two peaks (a *doublet*) and a group of three peaks (a *triplet*). This complication, which may be disturbing to a student who longs for the simple life, is in fact very useful to the organic chemist, and adds greatly to the power of NMR spectroscopy as a tool for the elucidation of chemical structures. The split peaks (*multiplets*) arise because the magnetic field experienced by the protons of one group is influenced by the spin arrangements of the protons in an adjacent group.

Spin-spin coupling is often one of the more challenging topics for organic chemistry students to master. Remember the  $n + 1$  rule and the associated coupling patterns.

### THE SOURCE OF SPIN-SPIN COUPLING

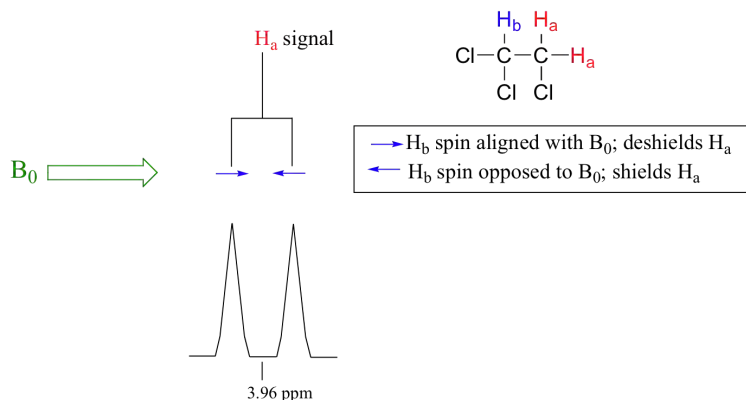
The  $^1\text{H}$ -NMR spectra that we have seen so far (of methyl acetate and *para*-xylene) are somewhat unusual in the sense that in both of these molecules, each set of protons generates a single NMR signal. In fact, the  $^1\text{H}$ -NMR spectra of most organic molecules contain proton signals that are 'split' into two or more sub-peaks. Rather than being a complication, however, this splitting behavior actually provides us with more information about our sample molecule.

Consider the spectrum for 1,1,2-trichloroethane. In this and in many spectra to follow, we show enlargements of individual signals so that the signal splitting patterns are recognizable.



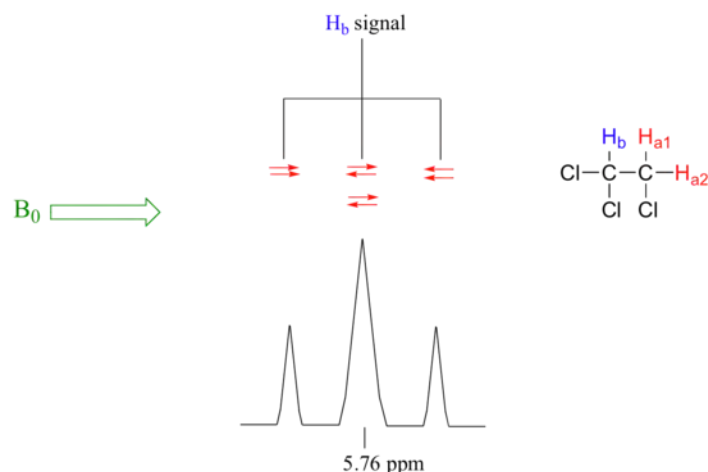
The signal at 3.96 ppm, corresponding to the two  $H_a$  protons, is split into two subpeaks of equal height (and area) – this is referred to as a **doublet**. The  $H_b$  signal at 5.76 ppm, on the other hand, is split into three sub-peaks, with the middle peak higher than the two outside peaks - if we were to integrate each subpeak, we would see that the area under the middle peak is twice that of each of the outside peaks. This is called a **triplet**.

The source of signal splitting is a phenomenon called **spin-spin coupling**, a term that describes the magnetic interactions between neighboring, non-equivalent NMR-active nuclei. In our 1,1,2,2 tetrachloroethane example, the  $H_a$  and  $H_b$  protons are spin-coupled to each other. Here's how it works, looking first at the  $H_a$  signal: in addition to being shielded by nearby valence electrons, each of the  $H_a$  protons is also influenced by the small magnetic field generated by  $H_b$  next door (remember, each spinning proton is like a tiny magnet). The magnetic moment of  $H_b$  will be aligned *with*  $B_0$  in (slightly more than) half of the molecules in the sample, while in the remaining half of the molecules it will be opposed to  $B_0$ . The  $B_{eff}$  'felt' by  $H_a$  is a slightly weaker if  $H_b$  is aligned against  $B_0$ , or slightly stronger if  $H_b$  is aligned with  $B_0$ . In other words, in half of the molecules  $H_a$  is *shielded* by  $H_b$  (thus the NMR signal is shifted slightly upfield) and in the other half  $H_a$  is *deshielded* by  $H_b$  (and the NMR signal shifted slightly downfield). What would otherwise be a single  $H_a$  peak has been split into two sub-peaks (a doublet), one upfield and one downfield of the original signal. These ideas can be illustrated by a **splitting diagram**, as shown below.



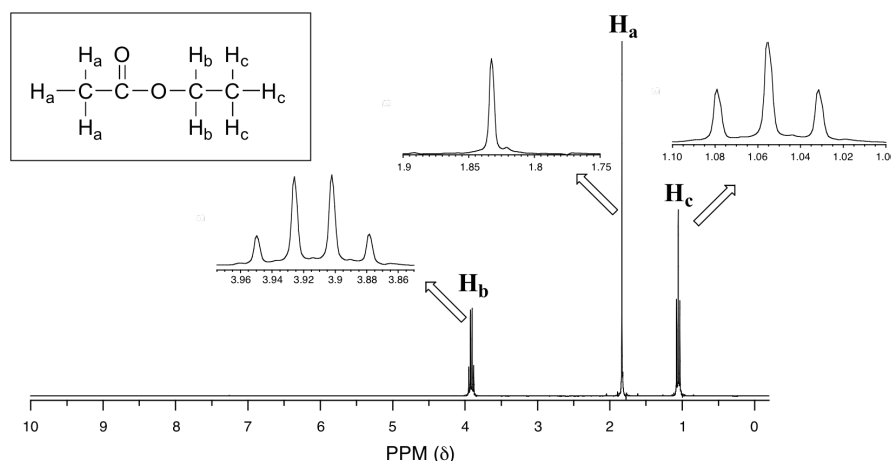
Now, let's think about the  $H_b$  signal. The magnetic environment experienced by  $H_b$  is influenced by the fields of both neighboring  $H_a$  protons, which we will call  $H_{a1}$  and  $H_{a2}$ . There are four possibilities here, each of which is equally probable. First, the magnetic fields of both  $H_{a1}$  and  $H_{a2}$  could be aligned with  $B_0$ , which would deshield  $H_b$ , shifting its NMR signal slightly downfield. Second, both the  $H_{a1}$  and  $H_{a2}$  magnetic fields could be aligned opposed to  $B_0$ , which would shield  $H_b$ , shifting its resonance signal slightly upfield. Third and fourth,  $H_{a1}$  could be with  $B_0$  and  $H_{a2}$  opposed, or  $H_{a1}$  opposed to  $B_0$  and  $H_{a2}$  with  $B_0$ . In each of the last two cases, the shielding effect of one  $H_a$  proton would cancel the deshielding effect of the other, and the chemical shift of  $H_b$  would be unchanged.





So in the end, the signal for  $H_b$  is a **triplet**, with the middle peak twice as large as the two outer peaks because there are two ways that  $H_{a1}$  and  $H_{a2}$  can cancel each other out.

Now, consider the spectrum for ethyl acetate:



We see an unsplit '**singlet**' peak at 1.833 ppm that corresponds to the acetyl ( $H_a$ ) hydrogens – this is similar to the signal for the acetate hydrogens in methyl acetate that we considered earlier. This signal is unsplit because there are no adjacent hydrogens on the molecule. The signal at 1.055 ppm for the  $H_c$  hydrogens is split into a triplet by the two  $H_b$  hydrogens next door. The explanation here is the same as the explanation for the triplet peak we saw previously for 1,1,2-trichloroethane.

The  $H_b$  hydrogens give rise to a **quartet** signal at 3.915 ppm – notice that the two middle peaks are taller than the two outside peaks. This splitting pattern results from the spin-coupling effect of the *three*  $H_c$  hydrogens next door, and can be explained by an analysis similar to that which we used to explain the doublet and triplet patterns.

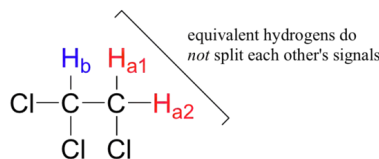
### Example

- Explain, using left and right arrows to illustrate the possible combinations of nuclear spin states for the  $H_c$  hydrogens, why the  $H_b$  signal in ethyl acetate is split into a quartet.
- The integration ratio of doublets is 1:1, and of triplets is 1:2:1. What is the integration ratio of the  $H_b$  quartet in ethyl acetate? (Hint – use the illustration that you drew in part a to answer this question.)

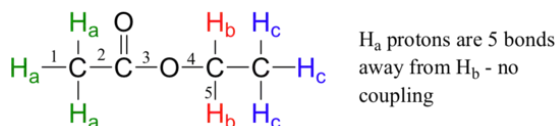
### Solution

By now, you probably have recognized the pattern which is usually referred to as the  **$n + 1$  rule**: if a set of hydrogens has  $n$  neighboring, non-equivalent hydrogens, it will be split into  $n + 1$  subpeaks. Thus the two  $H_b$  hydrogens in ethyl acetate split the  $H_c$  signal into a triplet, and the three  $H_c$  hydrogens split the  $H_b$  signal into a quartet. This is very useful information if we are trying to determine the structure of an unknown molecule: if we see a triplet signal, we know that the corresponding hydrogen or set of hydrogens has two 'neighbors'. When we begin to determine structures of unknown compounds using  $^1\text{H}$ -NMR spectral data, it will become more apparent how this kind of information can be used.

Three important points need to be emphasized here. First, signal splitting only occurs between non-equivalent hydrogens – in other words,  $H_{a1}$  in 1,1,2-trichloroethane is *not* split by  $H_{a2}$ , and vice-versa.

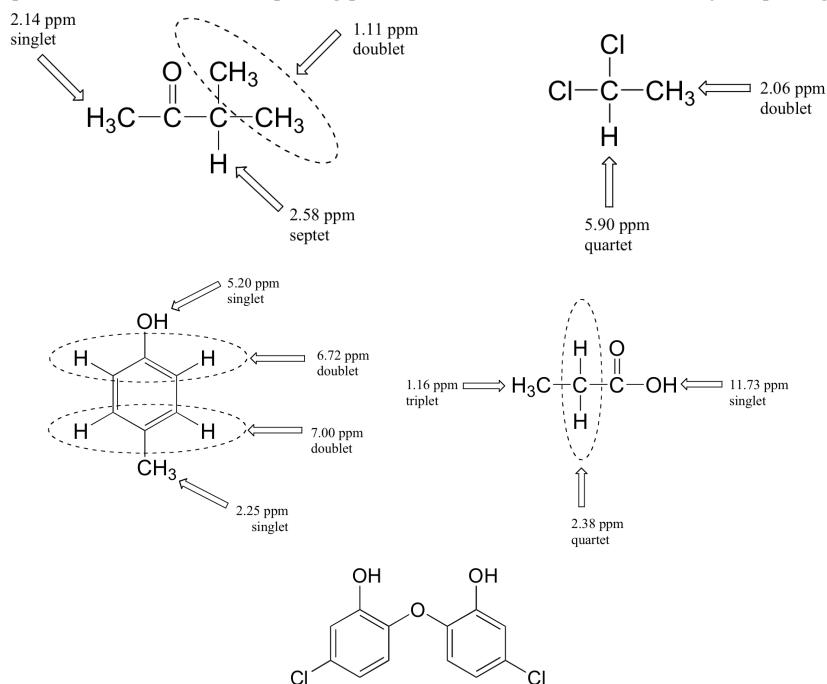


Second, splitting occurs primarily between hydrogens that are separated by three bonds. This is why the  $H_a$  hydrogens in ethyl acetate form a singlet– the nearest hydrogen neighbors are five bonds away, too far for coupling to occur.



Occasionally we will see four-bond and even 5-bond splitting, but in these cases the magnetic influence of one set of hydrogens on the other set is much more subtle than what we typically see in three-bond splitting (more details about how we quantify coupling interactions is provided in section 5.5B). Finally, splitting is most noticeable with hydrogens bonded to carbon. Hydrogens that are bonded to heteroatoms (alcohol or amino hydrogens, for example) are coupled weakly - or not at all - to their neighbors. This has to do with the fact that these protons exchange rapidly with solvent or other sample molecules.

Below are a few more examples of chemical shift and splitting pattern information for some relatively simple organic molecules.



## MULTIPLICITY IN PROTON NMR

The number of lines in a peak is always one more ( $n+1$ ) than the number of hydrogens on the neighboring carbon. This table summarizes coupling patterns that arise when protons have different numbers of neighbors.

# of lines	ratio of lines	term for peak	# of neighbors
1	-	singlet	0
2	1:1	doublet	1
3	1:2:1	triplet	2
4	1:3:3:1	quartet	3
5	1:4:6:4:1	quintet	4
6	1:5:10:10:5:1	sextet	5
7	1:6:15:20:15:6:1	septet	6
8	1:7:21:35:35:21:7:1	octet	7
9	1:8:28:56:70:56:28:8:1	nonet	8

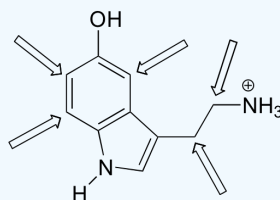
### Example

How many proton signals would you expect to see in the  $^1\text{H}$ -NMR spectrum of triclosan (a common antimicrobial agent found in detergents)? For each of the proton signals, predict the splitting pattern. Assume that you see only 3-bond coupling.

Solutions

### Example

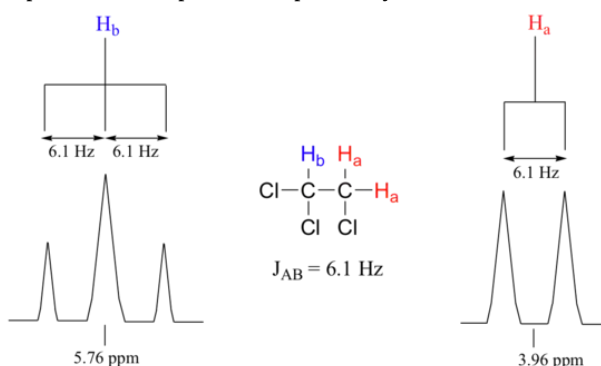
Predict the splitting pattern for the  $^1\text{H}$ -NMR signals corresponding to the protons at the locations indicated by arrows (the structure is that of the neurotransmitter serotonin).



Solutions

## COUPLING CONSTANTS

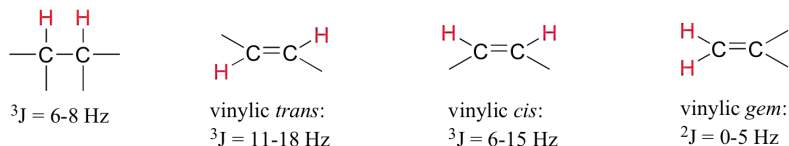
Chemists quantify the spin-spin coupling effect using something called the **coupling constant**, which is abbreviated with the capital letter  $J$ . The coupling constant is simply the difference, expressed in Hz, between two adjacent sub-peaks in a split signal. For our doublet in the 1,1,2-trichloroethane spectrum, for example, the two subpeaks are separated by 6.1 Hz, and thus we write  $^3J_{a-b} = 6.1 \text{ Hz}$ .



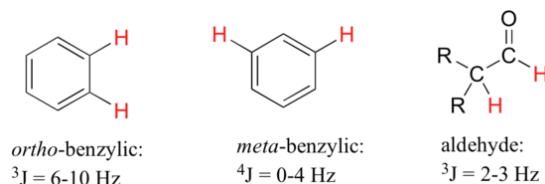
The superscript 3 tells us that this is a three-bond coupling interaction, and the a-b subscript tells us that we are talking about coupling between  $H_a$  and  $H_b$ . Unlike the chemical shift value, *the coupling constant, expressed in Hz, is the same regardless of the applied field strength of the NMR magnet*. This is because the strength of the magnetic moment of a neighboring proton, which is the source of the spin-spin coupling phenomenon, does *not* depend on the applied field strength.

When we look closely at the triplet signal in 1,1,2-trichloroethane, we see that the coupling constant - the 'gap' between subpeaks - is 6.1 Hz, the same as for the doublet. This is an important concept! The coupling constant  $^3J_{a-b}$  quantifies the magnetic interaction between the  $H_a$  and  $H_b$  hydrogen sets, and *this interaction is of the same magnitude in either direction*. In other words,  $H_a$  influences  $H_b$  to the same extent that  $H_b$  influences  $H_a$ . When looking at more complex NMR spectra, this idea of **reciprocal coupling constants** can be very helpful in identifying the coupling relationships between proton sets.

Coupling constants between proton sets on neighboring  $sp^3$ -hybridized carbons is typically in the region of 6-8 Hz. With protons bound to  $sp^2$ -hybridized carbons, coupling constants can range from 0 Hz (no coupling at all) to 18 Hz, depending on the bonding arrangement.



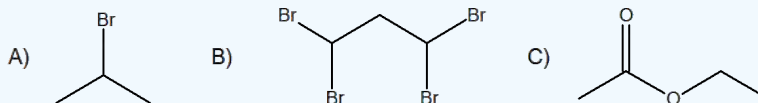
For vinylic hydrogens in a *trans* configuration, we see coupling constants in the range of  $^3J = 11-18$  Hz, while *cis* hydrogens couple in the  $^3J = 6-15$  Hz range. The 2-bond coupling between hydrogens bound to the same alkene carbon (referred to as geminal hydrogens) is very fine, generally 5 Hz or lower. *Ortho* hydrogens on a benzene ring couple at 6-10 Hz, while 4-bond coupling of up to 4 Hz is sometimes seen between *meta* hydrogens.



Fine (2-3 Hz) coupling is often seen between an aldehyde proton and a three-bond neighbor. Table 4 lists typical constant values.

### Exercise

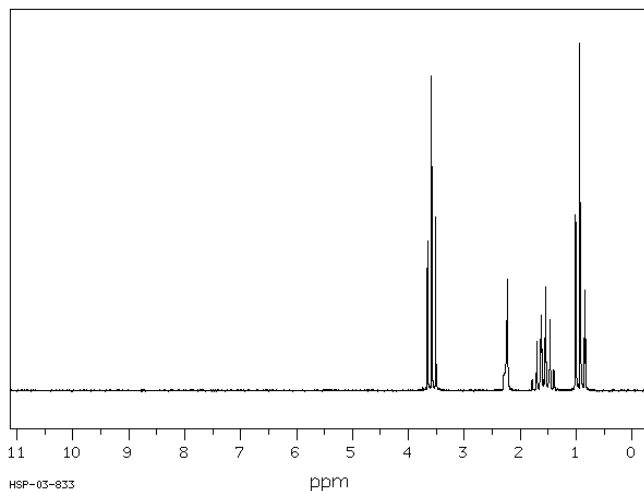
10. Predict the splitting patterns of the following molecules:



11. Draw the following according to the criteria given.

- A.  $C_3H_5O$ ; two triplet, 1 doublet
- B.  $C_4H_8O_2$ ; three singlets
- C.  $C_5H_{12}$ ; one singlet

12. The following spectrum is for  $C_3H_8O$ . Determine the structure.



A triplet; B singlet; C sextet; D triplet

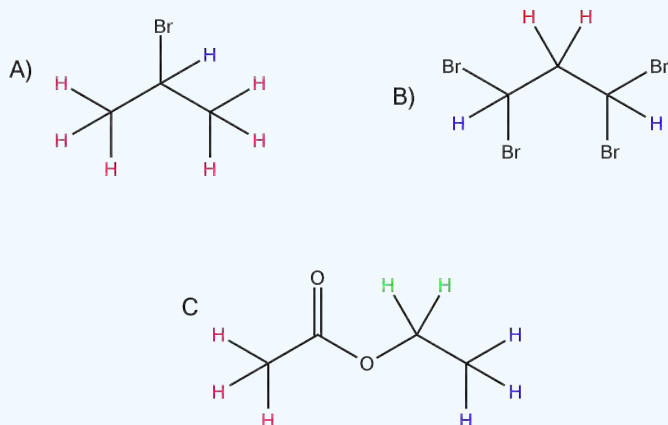
Source: SDBSWeb : <http://sdbs.db.aist.go.jp> (National Institute of Advanced Industrial Science and Technology, 3 December 2016)

### Answer

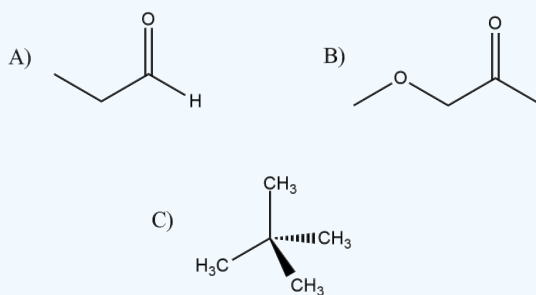
10.

- A. H: Doublet. H: Septet
- B. H: Doublet, H: Triplet

C. H: Singlet, H: Quartet, H: Triplet

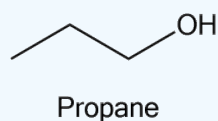


11.



These are just some drawings, more may be possible.

12.



**Note:** Remember, chemically equivalent protons do not couple with one another to give spin-spin splitting.

## CONTRIBUTORS AND ATTRIBUTIONS

- Dr. Dietmar Kennepohl FCIC (Professor of Chemistry, [Athabasca University](#))
- Prof. Steven Farmer ([Sonoma State University](#))
- [Organic Chemistry With a Biological Emphasis](#) by Tim Soderberg (University of Minnesota, Morris)
- Chris P Schaller, Ph.D., (College of Saint Benedict / Saint John's University)

12.7: Spin-Spin Splitting in  $^1\text{H}$  NMR Spectra is shared under a [CC BY-NC-SA 4.0](#) license and was authored, remixed, and/or curated by LibreTexts.

## 12.8: MORE COMPLEX SPIN-SPIN SPLITTING PATTERNS

### Objectives

After completing this section, you should be able to

1. explain how multiple coupling can give rise to complex-looking  $^1\text{H}$  NMR spectra.
2. predict the splitting pattern expected in the  $^1\text{H}$  NMR spectrum of an organic compound in which multiple coupling is possible.
3. interpret  $^1\text{H}$  NMR spectra in which multiple coupling is evident.

### Key Terms

Make certain that you can define, and use in context, the key term below.

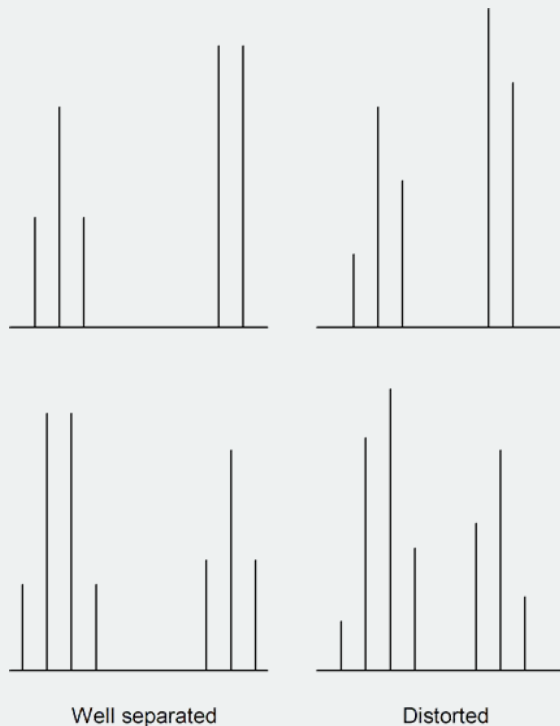
- tree diagram

### Study Notes

We saw the effects of spin-spin coupling on the appearance of a  $^1\text{H}$  NMR signal. These effects can be further complicated when that signal is coupled to several different protons. For example,  $\text{BrCH}_2\text{CH}_2\text{CH}_2\text{Cl}$  would produce three signals. The hydrogens at  $\text{C}_1$  and  $\text{C}_3$  would each be triplets because of coupling to the two hydrogens on  $\text{C}_2$ . However, the hydrogen on  $\text{C}_2$  “sees” two different sets of neighbouring hydrogens, and would therefore produce a triplet of triplets.

Another effect that can complicate a spectrum is the “closeness” of signals. If signals accidentally overlap they can be difficult to identify. In the example above, we expected a triplet of triplets. However, if the coupling is identical (or almost identical) between the hydrogens on  $\text{C}_2$  and the hydrogens on both  $\text{C}_1$  and  $\text{C}_3$ , one would observe a quintet in the  $^1\text{H}$  NMR spectrum. [You can try this yourself by drawing a tree diagram of a triplet of triplets assuming, first, different coupling constants, and then, identical coupling constants.] Keep this point in mind when interpreting real  $^1\text{H}$  NMR spectra.

Also, when multiplets are well separated, they form patterns. However, when multiplets approach each other in the spectrum they sometimes become distorted. Usually, the inner peaks become larger than the outer peaks. Note the following examples:



Aromatic ring protons quite commonly have overlapping signals and multiplet distortions. Sometimes you cannot distinguish between individual signals, and one or more messy multiplets often appear in the aromatic region.

It is much easier to rationalize the observed  $^1\text{H}$  NMR spectrum of a known compound than it is to determine the structure of an unknown compound from its  $^1\text{H}$  NMR spectrum. However, rationalizations can be a useful learning technique as you try to improve your proficiency in spectral interpretation. Remember that when a chemist tries to interpret the  $^1\text{H}$  NMR spectrum of an unknown

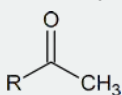
compound, he or she usually has additional information available to make the task easier. For example, the chemist will almost certainly have an infrared spectrum of the compound and possibly a mass spectrum too. Details of how the compound was synthesized may be available, together with some indication of its chemical properties, its physical properties, or both.

In examinations, you will be given a range of information (IR, MS, UV data and empirical formulae) to aid you with your structural determination using  $^1\text{H}$  NMR spectroscopy. For example, you may be asked to determine the structure of  $\text{C}_6\text{H}_{12}\text{O}$  given the following spectra:

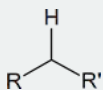
**Infrared spectrum:**  $3000\text{ cm}^{-1}$  and  $1720\text{ cm}^{-1}$  absorptions are both strong

$^1\text{H}$ NMR	$\delta$ (ppm)	Protons	Multiplicity
	0.87	6	doublet
	1.72	1	broad multiplet
	2.00	3	singlet
	2.18	2	doublet

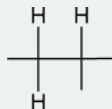
To answer this question, you note that the infrared spectrum of  $\text{C}_6\text{H}_{12}\text{O}$  shows  $\text{C-H}$  stretching ( $3000\text{ cm}^{-1}$ ) and  $\text{C=O}$  stretching ( $1720\text{ cm}^{-1}$ ). Now you have to piece together the information from the  $^1\text{H}$  NMR spectrum. Notice the singlet with three protons at 2.00 ppm. This signal indicates a methyl group that is not coupled to other protons. It could possibly mean the presence of a methyl ketone functional group.



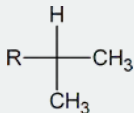
The signal at 1.72 ppm is a broad multiplet, suggesting that a carbon with a single proton is beside carbons with several different protons.



The doublet signal at 2.18 ppm implies that a  $\text{-CH}_2\text{-}$  group is attached to a carbon having only one proton.

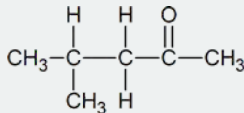


The six protons showing a doublet at 0.87 ppm indicate two equivalent methyl groups attached to a carbon with one proton.



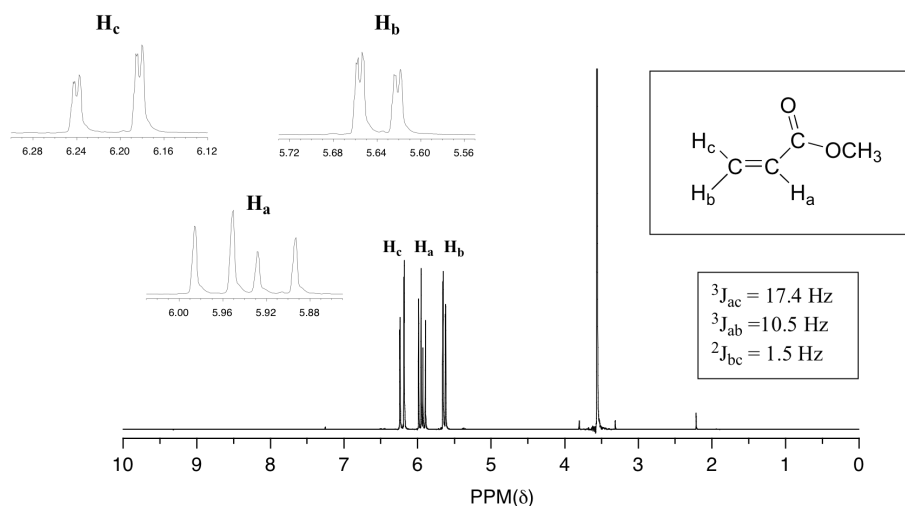
Whenever you see a signal in the 0.7-1.3 ppm range that is a multiplet of three protons (3, 6, 9) it is most likely caused by equivalent methyl groups.

Using trial and error, and with the above observations, you should come up with the correct structure.

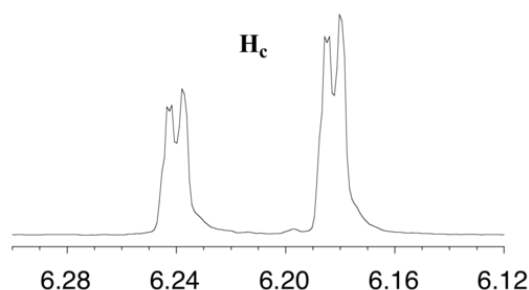


## COMPLEX COUPLING

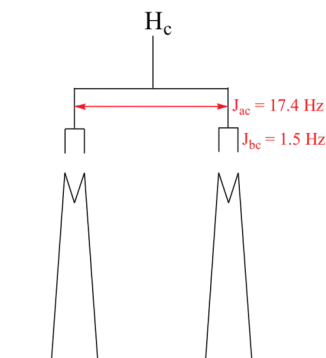
In all of the examples of spin-spin coupling that we have seen so far, the observed splitting has resulted from the coupling of one set of hydrogens to *just one* neighboring set of hydrogens. When a set of hydrogens is coupled to *two or more* sets of nonequivalent neighbors, the result is a phenomenon called **complex coupling**. A good illustration is provided by the  $^1\text{H}$ -NMR spectrum of methyl acrylate:



First, let's first consider the  $\text{H}_\text{c}$  signal, which is centered at 6.21 ppm. Here is a closer look:



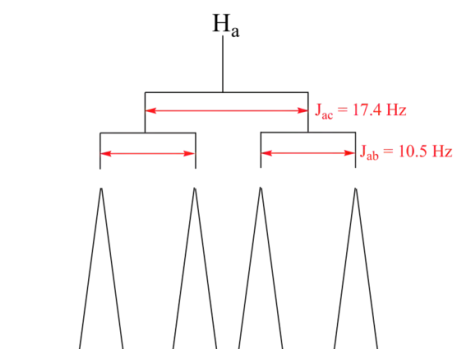
With this enlargement, it becomes evident that the  $\text{H}_\text{c}$  signal is actually composed of four sub-peaks. Why is this?  $\text{H}_\text{c}$  is coupled to both  $\text{H}_\text{a}$  and  $\text{H}_\text{b}$ , but with *two different coupling constants*. Once again, a splitting diagram (or tree diagram) can help us to understand what we are seeing.  $\text{H}_\text{a}$  is *trans* to  $\text{H}_\text{c}$  across the double bond, and splits the  $\text{H}_\text{c}$  signal into a doublet with a coupling constant of  $^3J_{\text{ac}} = 17.4 \text{ Hz}$ . In addition, each of these  $\text{H}_\text{c}$  doublet sub-peaks is split again by  $\text{H}_\text{b}$  (*geminal* coupling) into two more doublets, each with a much smaller coupling constant of  $^2J_{\text{bc}} = 1.5 \text{ Hz}$ .



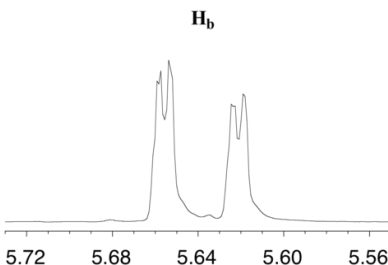
The result of this 'double splitting' is a pattern referred to as a **doublet of doublets**, abbreviated '**dd**'.

The signal for  $\text{H}_\text{a}$  at 5.95 ppm is also a doublet of doublets, with coupling constants  $^3J_{\text{ac}} = 17.4 \text{ Hz}$  and  $^3J_{\text{ab}} = 10.5 \text{ Hz}$ .





The signal for  $H_b$  at 5.64 ppm is split into a doublet by  $H_a$ , a *cis* coupling with  $^3J_{ab} = 10.4$  Hz. Each of the resulting sub-peaks is split again by  $H_c$ , with the same *geminal* coupling constant  $^2J_{bc} = 1.5$  Hz that we saw previously when we looked at the  $H_c$  signal. The overall result is again a doublet of doublets, this time with the two 'sub-doublets' spaced slightly closer due to the smaller coupling constant for the *cis* interaction. Here is a blow-up of the actual  $H_b$  signal:



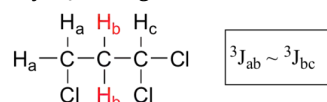
### Example

Construct a splitting diagram for the  $H_b$  signal in the  $^1H$ -NMR spectrum of methyl acrylate. Show the chemical shift value for each sub-peak, expressed in Hz (assume that the resonance frequency of TMS is exactly 300 MHz).

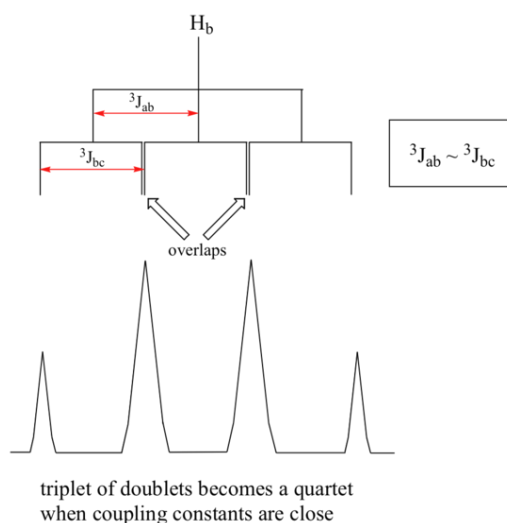
Solution

When constructing a splitting diagram to analyze complex coupling patterns, it is usually easier to show the larger splitting first, followed by the finer splitting (although the reverse would give the same end result).

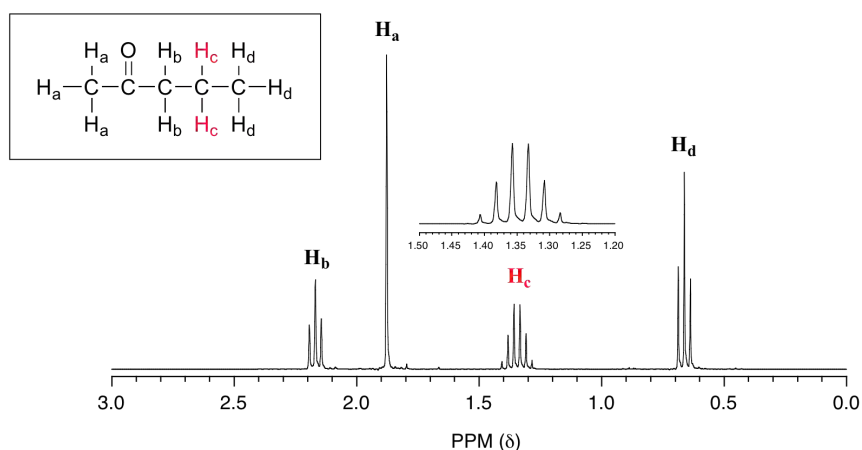
When a proton is coupled to two different neighboring proton sets with identical or very close coupling constants, the splitting pattern that emerges often appears to follow the simple ' $n + 1$  rule' of non-complex splitting. In the spectrum of 1,1,3-trichloropropane, for example, we would expect the signal for  $H_b$  to be split into a triplet by  $H_a$ , and again into doublets by  $H_c$ , resulting in a 'triplet of doublets'.



$H_a$  and  $H_c$  are not equivalent (their chemical shifts are different), but it turns out that  $^3J_{ab}$  is very close to  $^3J_{bc}$ . If we perform a splitting diagram analysis for  $H_b$ , we see that, due to the overlap of sub-peaks, the signal appears to be a quartet, and for all intents and purposes follows the  $n + 1$  rule.

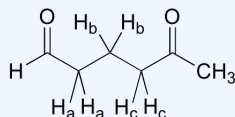


For similar reasons, the  $H_c$  peak in the spectrum of 2-pentanone appears as a sextet, split by the five combined  $H_b$  and  $H_d$  protons. Technically, this 'sextet' could be considered to be a 'triplet of quartets' with overlapping sub-peaks.



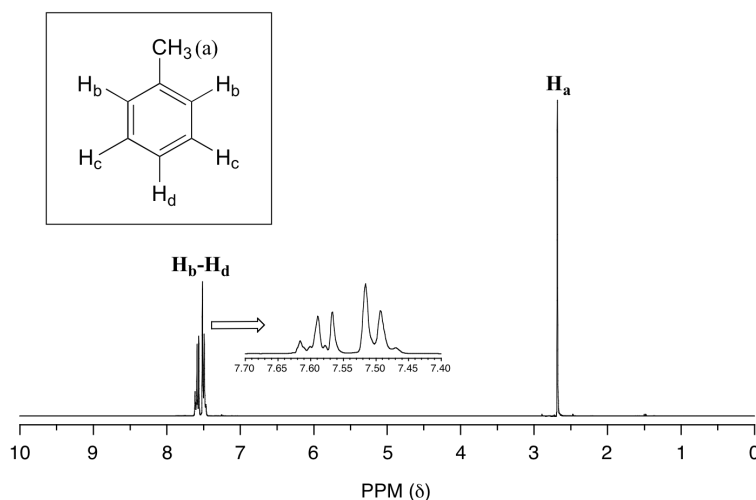
### Example

What splitting pattern would you expect for the signal corresponding to  $H_b$  in the molecule below? Assume that  $J_{ab} \sim J_{bc}$ . Draw a splitting diagram for this signal, and determine the relative integration values of each subpeak.



Solution

In many cases, it is difficult to fully analyze a complex splitting pattern. In the spectrum of toluene, for example, if we consider only 3-bond coupling we would expect the signal for  $H_b$  to be a doublet,  $H_d$  a triplet, and  $H_c$  a triplet.



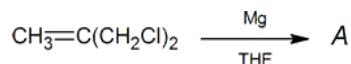
In practice, however, all three aromatic proton groups have very similar chemical shifts and their signals overlap substantially, making such detailed analysis difficult. In this case, we would refer to the aromatic part of the spectrum as a **multiplet**.

When we start trying to analyze complex splitting patterns in larger molecules, we gain an appreciation for why scientists are willing to pay large sums of money (hundreds of thousands of dollars) for higher-field NMR instruments. Quite simply, the stronger our magnet is, the more resolution we get in our spectrum. In a 100 MHz instrument (with a magnet of approximately 2.4 Tesla field strength), the 12 ppm frequency 'window' in which we can observe proton signals is 1200 Hz wide. In a 500 MHz (~12 Tesla) instrument, however, the window is 6000 Hz - five times wider. In this sense, NMR instruments are like digital cameras and HDTVs: better resolution means more information and clearer pictures (and higher price tags!)

## PRACTICE UNKNOWNNS

1. Given the information below, draw the structures of compounds A through D.

a. An unknown compound A was prepared as follows:



### Mass spectrum:

base peak  $m/e = 39$

parent peak  $m/e = 54$

### $^1\text{H}$ NMR spectrum:

$\delta$ (ppm)	Relative Area	Multiplicity
1.0	2	triplet
5.4	1	quintet

b. Unknown compound B has the molecular formula  $\text{C}_7\text{H}_6\text{O}_2$ .

### Infrared spectrum:

$3200\text{ cm}^{-1}$  (broad) and  $1747\text{ cm}^{-1}$  (strong) absorptions

### $^1\text{H}$ NMR spectrum:

$\delta$ (ppm)	Protons
6.9	2
7.4	2
9.8	1
10.9	1

**Hint:** Aromatic ring currents deshield all proton signals just outside the ring.

c. Unknown compound C shows no evidence of unsaturation and contains only carbon and hydrogen.

### Mass spectrum:

parent peak  $m/e = 68$

### $^1\text{H}$ NMR spectrum:

$\delta$ (ppm)	Relative Area	Multiplicity
1.84	3	triplet
2.45	1	septet

**Hint:** Think three dimensionally!

d. Unknown compound *D* ( $C_{15}H_{14}O$ ) has the following spectral properties.

**Infrared spectrum:**

3010  $cm^{-1}$  (medium)

1715  $cm^{-1}$  (strong)

1610  $cm^{-1}$  (strong)

1500  $cm^{-1}$  (strong)

**$^1H$  NMR spectrum:**

$\delta$ (ppm)	Relative Area	Multiplicity
3.00	2	triplet
3.07	2	triplet
7.1-7.9	10	Multiplets

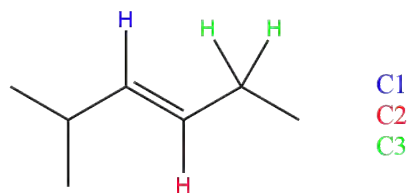
**Answers**

- 
- 
- 
- 

**QUESTIONS**

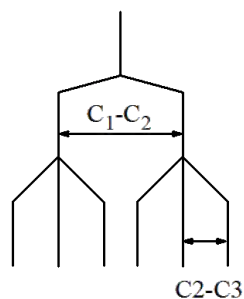
**Q13.12.1**

In the following molecule, the C2 is coupled with both the vinyl, C1, and the alkyl C3. Draw the splitting tree diagram.



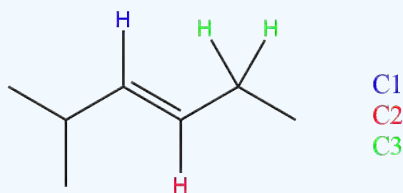
**SOLUTIONS**

**S13.12.1**



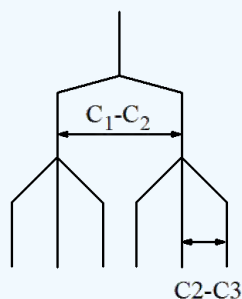
### Exercise

13. In the following molecule, the C2 is coupled with both the vinyl, C1, and the alkyl C3. Draw the splitting tree diagram.



Answer

13.



### CONTRIBUTORS AND ATTRIBUTIONS

- Dr. Dietmar Kennepohl FCIC (Professor of Chemistry, [Athabasca University](#))
- Prof. Steven Farmer ([Sonoma State University](#))
- [Organic Chemistry With a Biological Emphasis](#) by Tim Soderberg (University of Minnesota, Morris)

12.8: More Complex Spin-Spin Splitting Patterns is shared under a [CC BY-NC-SA 4.0](#) license and was authored, remixed, and/or curated by LibreTexts.

## 12.9: USES OF $^1\text{H}$ NMR SPECTROSCOPY

There will be cases in which you already know what the structure might be. In these cases:

- You should draw attention to pieces of data that most strongly support your expected structure. This approach will demonstrate evaluative understanding of the data; that means you can look at data and decide what parts are more crucial than others.
- You should also draw attention to negative results: that is, peaks that might be there if this spectrum matched another, possible structure, but that are in fact missing.

One of the most complicated problems to deal with is the analysis of a mixture. This situation is not uncommon when students run reactions in lab and analyse the data.

- Sometimes the spectra show a little starting material mixed in with the product.
- Sometimes solvents show up in the spectrum.
- As you might expect, the minor component usually shows up as smaller peaks in the spectrum. If there are fewer molecules present, then there are usually fewer protons to absorb in the spectrum.
- In this case, you should probably make two completely separate sets of data tables for your analysis, one for each compound, or else one for the main compound and one for impurities.

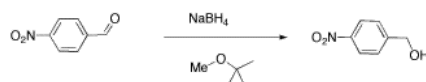
Remember that integration ratios are really only meaningful within a single compound. If your NMR sample contains some benzene ( $\text{C}_6\text{H}_6$ ) and some acetone ( $\text{CH}_3\text{COCH}_3$ ), and there is a peak at 7.15 that integrates to 1 proton and a peak at 2.10 ppm integrating to 6 protons, it might mean there are 6 protons in acetone and 1 in benzene, but you can tell that isn't true by looking at the structure. There must be six times as many acetone molecules as benzene molecules in the sample.

There are six protons in the benzene, and they should all show up near 7 ppm. There are six protons in acetone, and they should all show up near 2 ppm. Assuming that small integral of 1H for the benzene is really supposed to be 6H, then the large integral of 6H for the acetone must also represent six times as many hydrogens, too. It would be 36 H. There are only six hydrogens in acetone, so it must represent six times as many acetone molecules as there are benzenes.

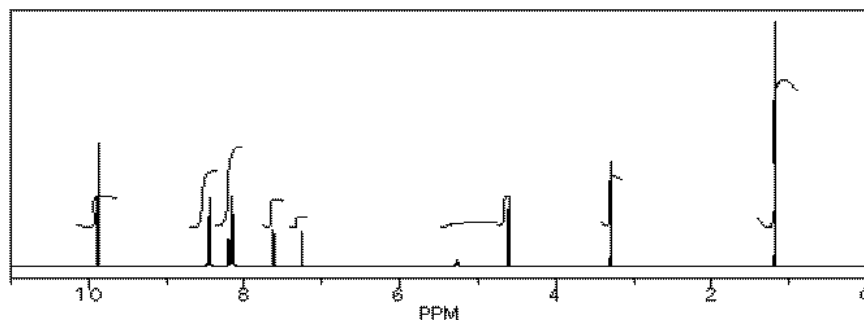
Similarly, if you have decided that you can identify two sets of peaks in the  $^1\text{H}$  spectrum, analysing them in different tables makes it easy to keep the integration analysis completely separate too ; 1 H in one table will not be the same size integral as 1 H in the other table unless the concentrations of the two compounds in the sample are the same.

However, comparing the ratio of two integrals for two different compounds can give you the ratio of the two compounds in solution, just as we could determine the ratio of benzene to acetone in the mixture described above.

We will look at two examples of sample mixtures that could arise in lab. Results like these are pretty common events in the lab. In the first example, a student tried to carry out the following reaction, a borohydride reduction of an aldehyde. The borohydride should give a hydride anion to the  $\text{C}=\text{O}$  carbon; washing with water should then supply a proton to the oxygen, giving an alcohol.


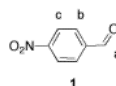
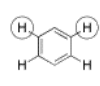
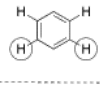
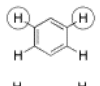
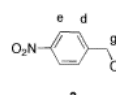
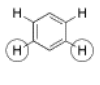





Her reaction produced the following spectrum.



(simulated data)

From this data, she produced the table below.

	shift	integration	int(n)	internal ratio	multiplicity	part structure	assignment
a	9.9 ppm	11 mm	2H	1H	singlet		
b	8.5 ppm	23 mm	4H	2H	doublet		
c	8.1 ppm	(20 mm?)	4H	2H	doublet		
d	8.2 ppm	(10 mm?)	2H	2H	doublet		
e	7.6 ppm	9 mm	2H	2H	doublet		
f	5.3 ppm	2 mm	0.4H	<1H	singlet	OH	
g	4.7 ppm	12 mm	2H	2H	singlet		
h	7.2 ppm	4 mm	0.8H	1H	singlet	CHCl <sub>3</sub>	
i	3.3 ppm	8 mm	1.5H	3H	singlet	O-CH <sub>3</sub>	
j	1.2 ppm	24 mm	4.5H	9H	singlet		
			23.4H total				

Ratio of reactant 1 to product 2 is 2:1 based on peaks at 9.9 and 4.7 ppm (2H / 1H) : (2H / 2H); the reaction is 33% complete [2 / (2+1)]

Ratio of product 2 to TBME is 2:1 based on peaks at 4.7 and 3.3 ppm (2H / 2H) : (1.5H / 3H); the ratio of 1:2:TBME is 2:1:0.5, so the sample is 57% 1 [2/(2+1+0.5)], 29% 2 and 14% TBME.

Notice how she calculated that ratio. She found a peak in molecule 1, the aldehyde, that she was pretty sure corresponded to the aldehydic hydrogen, the H attached to the C=O; in other words, the CH=O. She found another peak from molecule 2, the alcohol, that she was pretty sure represented the two hydrogens on the carbon attached to oxygen, the CH<sub>2</sub>-O.

The integrals for those two peaks are equal. They are both 2H in her table. However, she notes that within each molecule, the first integral really represents 1H and the second represents 2H. That means there must be twice as many of molecule 1 as there are molecule 2. That way, there would be 2 x CH=O, and its integral would be the same as the 1 x CH<sub>2</sub>-O in the other molecule.

One way to approach this kind of problem is to:

- choose one peak from each of the two compounds you want to compare.
- decide how many hydrogens each peak is supposed to represent in a molecule. Is it supposed to be a CH<sub>2</sub>, a CH, a CH<sub>3</sub>?
- divide the integral value for that peak by that number of hydrogens it is supposed to represent in a molecule.
- compare the two answers (integral A / ideal # H) vs (integral B / ideal # H).
- the ratio of those two answers is the ratio of the two molecules in the sample.

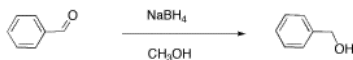
So there is twice as much aldehyde as alcohol in the mixture. In terms of these two compounds alone, she has 33% alcohol and 66% aldehyde. That's ( 1/(1+2) ) x100% for the alcohol, and ( 2/(1+2) ) x100% for the aldehyde. That calculation just represents the amount of individual component divided by the total of the components she wants to compare.

There are a number of things to take note of here.

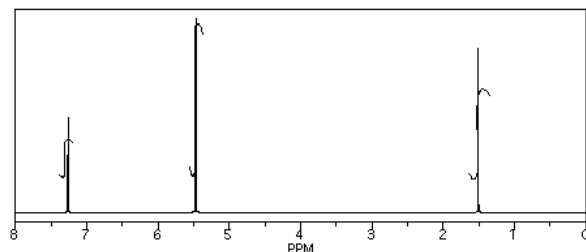
- Her reaction really didn't work very well. She still has majority starting material, not product.
- She will get a good grade on this lab. Although the experiment didn't work well, she has good data, and she has analyzed it very clearly.
- She has separated her data table into different sections for different compounds. Sometimes that makes it easier to analyze things.
- She has noted the actual integral data (she may have measured the integral with a ruler) and also converted it into a more convenient ratio, based on the integral for a peak that she felt certain about.
- She went one step further, and indicated the internal integration ratio within each individual compound.
- She calculated the % completion of the reaction using the integral data for the reactant and product, and she made clear what part of the data she used for that calculation. A similar procedure could be done if a student were just trying to separate two components in a mixture rather than carry out a reaction.
- She also calculated the overall purity of the mixture, including a solvent impurity that she failed to remove.

- However,  $\text{CHCl}_3$  is not included in her analysis of purity.  $\text{CHCl}_3$  really isn't part of her sample; it was just present in the NMR solvent, so it doesn't represent anything in the material she ended up with at the end of lab.

Another student carried out a similar reaction, shown below. He also finished the reaction by washing with water, but because methanol is soluble in water, he had to extract his product out of the water. He chose to use dichloromethane for that purpose.



He obtained the following data.



From this data, he constructed the following table.

	shift	integration	int(n)	multiplicity	partial structure	assignment
a	7.3 ppm	16 mm	5H	singlet		
b	5.4 ppm	64 mm	2H	singlet		
c	1.6 ppm	37 mm	1H	singlet		

There are some things to learn about this table, too.

- Does the integration ratio really match the integral data? Or is this just wishful thinking?
- This table might reflect what he wants to see in the data. But what else could be in the data?
- $\text{CHCl}_3$  is often seen in NMR spectra if  $\text{CDCl}_3$  is used for the NMR sample. It's there, at 7.2 ppm.
- "Leftover" or residual solvent is very common in real lab data. There it is,  $\text{CH}_2\text{Cl}_2$  from the extraction, at 5.4 ppm.
- What about water? Sometimes people don't dry their solutions properly before evaporating the solvent. There is probably water around 1.5 to 1.6 ppm here.

This student might not get a very good grade; the sample does not even show up in the spectrum, so he lost it somewhere. But his analysis is also poor, so he will really get a terrible grade.

### Example

Three students performed a synthesis of a fragrant ester, ethyl propanoate,  $\text{CH}_3\text{CH}_2\text{CO}_2\text{CH}_2\text{CH}_3$ . During their reactions, they each used a different solvent. The students were able to see peaks in the NMR spectrum for ethyl propanoate, as well as peaks for chloroform ( $\text{CHCl}_3$ , in the  $\text{CDCl}_3$  they used to make their NMR samples).

- See the first student's spectrum.
- See the second student's spectrum.
- See the third student's spectrum.

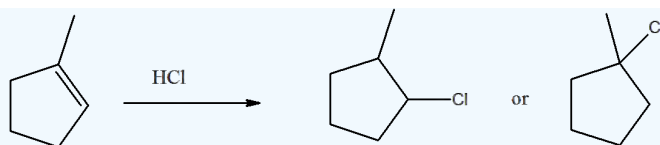
They were also able to determine that they had some leftover solvent in their samples by consulting a useful table of solvent impurities in NMR (which they found in Goldberg et. al., Organometallics 2010, 29, 2176-2179).

1. What is the ratio of leftover solvent to ethyl propanoate in each sample?
2. What is the percent of each sample that is leftover solvent

### Exercise

14. How can  $\text{H}^1$  NMR determine products? For example, how can you tell the difference between the products of this reaction?





#### Answer

14. Yes, you are able to determine the difference in the spectra. For the 2-chloro compound will have multiple quartets while the 1-chloro compound will only have a quintet and a triplet for the signals in the ring.

#### CONTRIBUTORS AND ATTRIBUTIONS

- [Dr. Dietmar Kennepohl](#) FCIC (Professor of Chemistry, [Athabasca University](#))
- Prof. Steven Farmer ([Sonoma State University](#))
- [Organic Chemistry With a Biological Emphasis](#) by [Tim Soderberg](#) (University of Minnesota, Morris)

[Chris P Schaller, Ph.D.](#), ([College of Saint Benedict / Saint John's University](#))

12.9: Uses of  $^1\text{H}$  NMR Spectroscopy is shared under a [CC BY-NC-SA 4.0](#) license and was authored, remixed, and/or curated by LibreTexts.

## 12.10: $^{13}\text{C}$ NMR SPECTROSCOPY

### THE BASICS OF $^{13}\text{C}$ -NMR SPECTROSCOPY

The magnetic moment of a  $^{13}\text{C}$  nucleus is much weaker than that of a proton, meaning that NMR signals from  $^{13}\text{C}$  nuclei are inherently much weaker than proton signals. This, combined with the low natural abundance of  $^{13}\text{C}$ , means that it is much more difficult to observe carbon signals: more sample is required, and often the data from hundreds of scans must be averaged in order to bring the signal-to-noise ratio down to acceptable levels. Unlike  $^1\text{H}$ -NMR signals, the area under a  $^{13}\text{C}$ -NMR signal cannot be used to determine the number of carbons to which it corresponds. This is because the signals for some types of carbons are inherently weaker than for other types – peaks corresponding to carbonyl carbons, for example, are much smaller than those for methyl or methylene ( $\text{CH}_2$ ) peaks. Peak integration is generally not useful in  $^{13}\text{C}$ -NMR spectroscopy, except when investigating molecules that have been enriched with  $^{13}\text{C}$  isotope (see section 5.6B).

The resonance frequencies of  $^{13}\text{C}$  nuclei are lower than those of protons in the same applied field – in a 7.05 Tesla instrument, protons resonate at about 300 MHz, while carbons resonate at about 75 MHz. This is fortunate, as it allows us to look at  $^{13}\text{C}$  signals using a completely separate 'window' of radio frequencies. Just like in  $^1\text{H}$ -NMR, the standard used in  $^{13}\text{C}$ -NMR experiments to define the 0 ppm point is tetramethylsilane (TMS), although of course in  $^{13}\text{C}$ -NMR it is the signal from the four equivalent *carbons* in TMS that serves as the standard. Chemical shifts for  $^{13}\text{C}$  nuclei in organic molecules are spread out over a much wider range than for protons – up to 200 ppm for  $^{13}\text{C}$  compared to 12 ppm for protons (see Table 3 for a list of typical  $^{13}\text{C}$ -NMR chemical shifts). This is also fortunate, because it means that the signal from each carbon in a compound can almost always be seen as a distinct peak, without the overlapping that often plagues  $^1\text{H}$ -NMR spectra. The chemical shift of a  $^{13}\text{C}$  nucleus is influenced by essentially the same factors that influence a proton's chemical shift: bonds to electronegative atoms and diamagnetic anisotropy effects tend to shift signals downfield (higher resonance frequency). In addition,  $\text{sp}^2$  hybridization results in a large downfield shift. The  $^{13}\text{C}$ -NMR signals for carbonyl carbons are generally the furthest downfield (170–220 ppm), due to both  $\text{sp}^2$  hybridization and to the double bond to oxygen.

#### Example 12.10.1

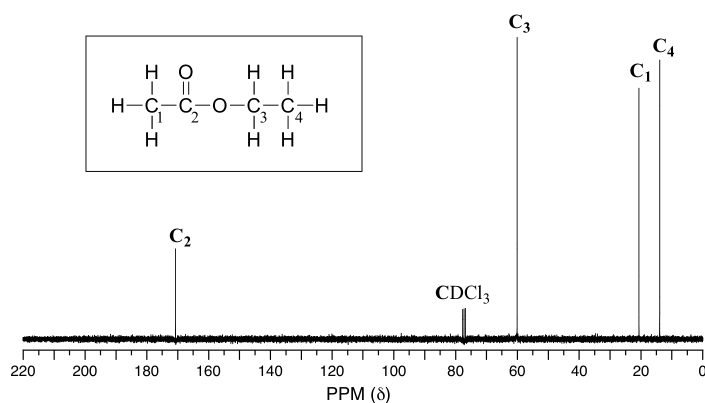
How many sets of non-equivalent carbons are there in each of the molecules shown in exercise 5.1?

#### Example 12.10.2

How many sets of non-equivalent carbons are there in:

- toluene
- 2-pentanone
- para-xylene
- triclosan

Because of the low natural abundance of  $^{13}\text{C}$  nuclei, it is very unlikely to find two  $^{13}\text{C}$  atoms near each other in the same molecule, and thus we do not see *spin-spin coupling between neighboring carbons in a  $^{13}\text{C}$ -NMR spectrum*. There is, however, **heteronuclear coupling** between  $^{13}\text{C}$  carbons and the hydrogens to which they are bound. Carbon-proton coupling constants are very large, on the order of 100 – 250 Hz. For clarity, chemists generally use a technique called **broadband decoupling**, which essentially 'turns off' C-H coupling, resulting in a spectrum in which all carbon signals are singlets. Below is the proton-decoupled  $^{13}\text{C}$ -NMR spectrum of ethyl acetate, showing the expected four signals, one for each of the carbons.



While broadband decoupling results in a much simpler spectrum, useful information about the presence of neighboring protons is lost. However, another modern NMR technique called DEPT (Distortionless Enhancement by Polarization Transfer) allows us to determine how many hydrogens are bound to each carbon. For example, a DEPT experiment tells us that the signal at 171 ppm in the ethyl acetate spectrum is a quaternary carbon (no hydrogens bound, in this case a carbonyl carbon), that the 61 ppm signal is from a methylene ( $\text{CH}_2$ ) carbon, and that the 21 ppm and 14 ppm signals are both methyl ( $\text{CH}_3$ ) carbons. The details of the DEPT experiment are beyond the scope of this text, but DEPT information will often be provided along with  $^{13}\text{C}$  spectral data in examples and problems.

## CONTRIBUTORS AND ATTRIBUTIONS

- Prof. Steven Farmer ([Sonoma State University](#))
- Chris P Schaller, Ph.D., ([College of Saint Benedict / Saint John's University](#))

12.10:  $^{13}\text{C}$  NMR Spectroscopy is shared under a [CC BY-NC-SA 4.0](#) license and was authored, remixed, and/or curated by LibreTexts.

## 12.11: CHEMICAL SHIFTS AND INTERPRETING $^{13}\text{C}$ NMR SPECTRA

### $^{13}\text{C}$ NMR CHEMICAL SHIFTS

The Carbon NMR is used for determining functional groups using characteristic shift values.  $^{13}\text{C}$  chemical shift is affected by electronegative effect and steric effect. If an H atom in an alkane is replaced by substituent X, electronegative atoms (O, N, halogen),  $\alpha$ -carbon and  $\beta$ -carbon shift to downfield (left; increase in ppm) while  $\gamma$ -carbon shifts to upfield. The steric effect is observed in acyclic and cyclic system, which leads to downshifted chemical shifts. Figure 9 shows typical  $^{13}\text{C}$  chemical shift regions of the major chemical class.

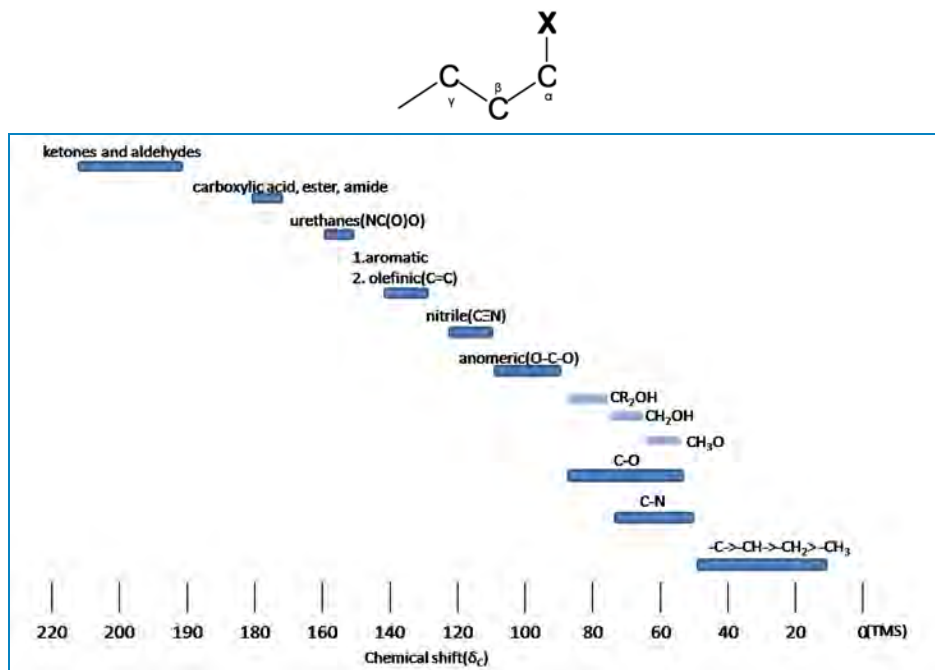


Figure 9:  $^{13}\text{C}$  Chemical shift range for organic compound

### SPIN-SPIN SPLITTING

Comparing the  $^1\text{H}$  NMR, there is a big difference thing in the  $^{13}\text{C}$  NMR. The  $^{13}\text{C}$ - $^{13}\text{C}$  spin-spin splitting rarely exists between adjacent carbons because  $^{13}\text{C}$  is naturally lower abundant (1.1%)

- $^{13}\text{C}$ - $^1\text{H}$  Spin coupling:**  $^{13}\text{C}$ - $^1\text{H}$  Spin coupling provides useful information about the number of protons attached to a carbon atom. In case of one bond coupling ( $^1J_{\text{CH}}$ ),  $-\text{CH}$ ,  $-\text{CH}_2$ , and  $\text{CH}_3$  have respectively doublet, triplet, quartets for the  $^{13}\text{C}$  resonances in the spectrum. However,  $^{13}\text{C}$ - $^1\text{H}$  Spin coupling has an disadvantage for  $^{13}\text{C}$  spectrum interpretation.  $^{13}\text{C}$ - $^1\text{H}$  Spin coupling is hard to analyze and reveal structure due to a forest of overlapping peaks that result from 100% abundance of  $^1\text{H}$ .
- Decoupling:** Decoupling is the process of removing  $^{13}\text{C}$ - $^1\text{H}$  coupling interaction to simplify a spectrum and identify which pair of nuclei is involved in the J coupling. The decoupled  $^{13}\text{C}$  spectra shows only one peak (singlet) for each unique carbon in the molecule (Fig 10.). Decoupling is performed by irradiating at the frequency of one proton with continuous low-power RF.

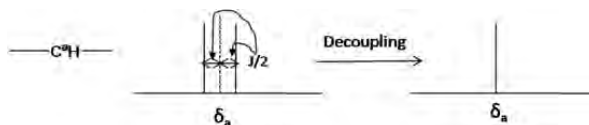


Fig 10. Decoupling in the  $^{13}\text{C}$  NMR

### CONTRIBUTORS AND ATTRIBUTIONS

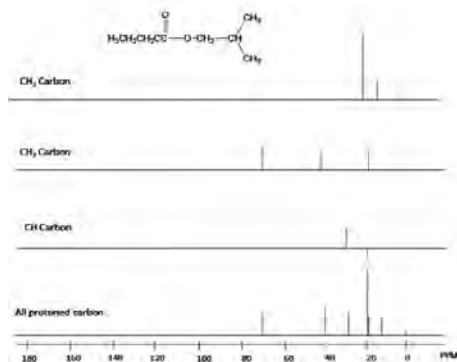
- Prof. Steven Farmer (Sonoma State University)
- Organic Chemistry With a Biological Emphasis by Tim Soderberg (University of Minnesota, Morris)
- Chris P Schaller, Ph.D., (College of Saint Benedict / Saint John's University)

12.11: Chemical Shifts and Interpreting  $^{13}\text{C}$  NMR Spectra is shared under a CC BY-NC-SA 4.0 license and was authored, remixed, and/or curated by LibreTexts.

## 12.12: $^{13}\text{C}$ NMR SPECTROSCOPY AND DEPT

### Distortions Enhancement by Polarization Transfer (DEPT)

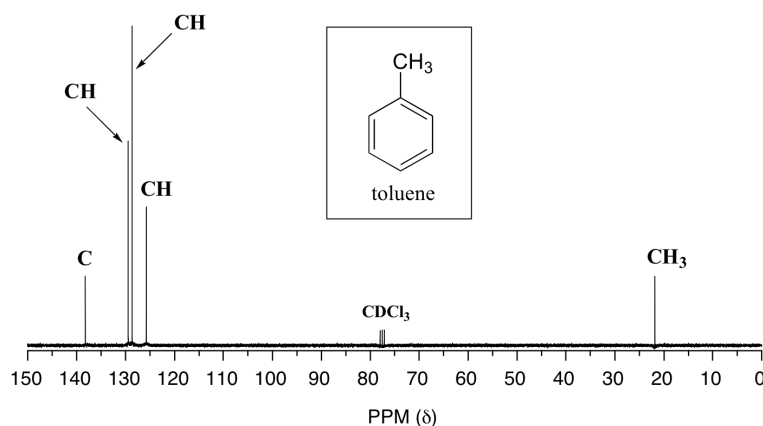
DEPT is used for distinguishing between a  $\text{CH}_3$  group, a  $\text{CH}_2$  group, and a  $\text{CH}$  group. The proton pulse is set at  $45^\circ$ ,  $90^\circ$ , or  $135^\circ$  in the three separate experiments. The different pulses depend on the number of protons attached to a carbon atom. Fig 11. is an example about DEPT spectrum.

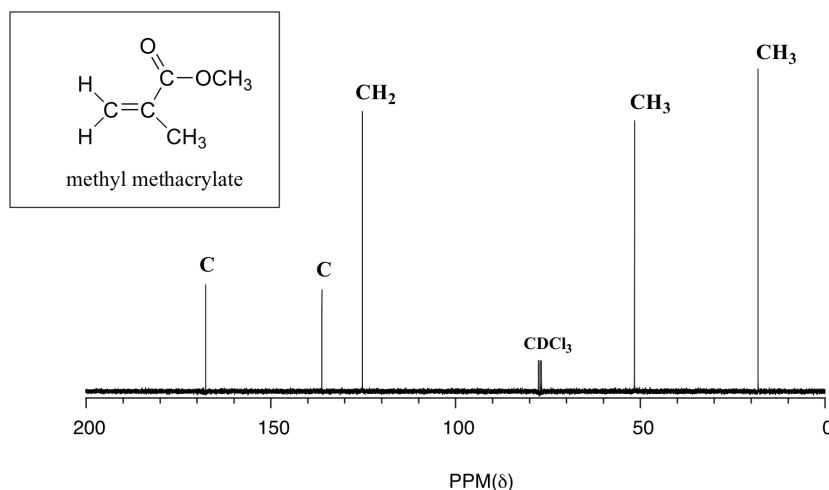


**Fig 11.** DEPT spectrum of *n*-isobutylbutyrate

While broadband decoupling results in a much simpler spectrum, useful information about the presence of neighboring protons is lost. However, another modern NMR technique called DEPT (Distortionless Enhancement by Polarization Transfer) allows us to determine how many hydrogens are bound to each carbon. For example, a DEPT experiment tells us that the signal at 171 ppm in the ethyl acetate spectrum is a quaternary carbon (no hydrogens bound, in this case a carbonyl carbon), that the 61 ppm signal is from a methylene ( $\text{CH}_2$ ) carbon, and that the 21 ppm and 14 ppm signals are both methyl ( $\text{CH}_3$ ) carbons. The details of the DEPT experiment are beyond the scope of this text, but DEPT information will often be provided along with  $^{13}\text{C}$  spectral data in examples and problems.

Below are two more examples of  $^{13}\text{C}$  NMR spectra of simple organic molecules, along with DEPT information.



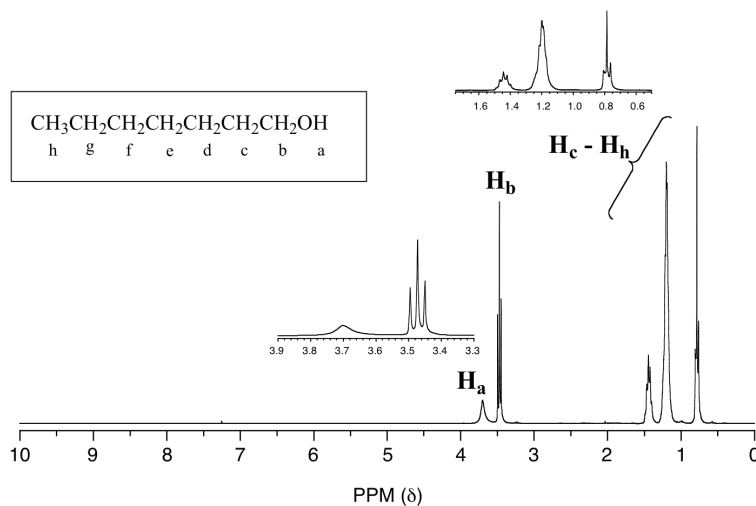


### EXAMPLE 13.5.2

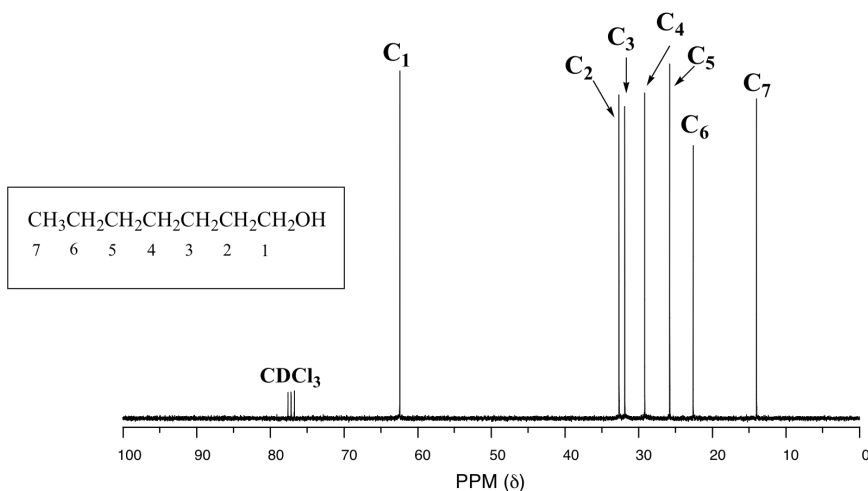
Give peak assignments for the  $^{13}\text{C}$ -NMR spectrum of methyl methacrylate, shown above.

**Solution**

One of the greatest advantages of  $^{13}\text{C}$ -NMR compared to  $^1\text{H}$ -NMR is the breadth of the spectrum - recall that carbons resonate from 0-220 ppm relative to the TMS standard, as opposed to only 0-12 ppm for protons. Because of this,  $^{13}\text{C}$  signals rarely overlap, and we can almost always distinguish separate peaks for each carbon, even in a relatively large compound containing carbons in very similar environments. In the proton spectrum of 1-heptanol, for example, only the signals for the alcohol proton ( $\text{H}_a$ ) and the two protons on the adjacent carbon ( $\text{H}_b$ ) are easily analyzed. The other proton signals overlap, making analysis difficult.



In the  $^{13}\text{C}$  spectrum of the same molecule, however, we can easily distinguish each carbon signal, and we know from this data that our sample has seven non-equivalent carbons. (Notice also that, as we would expect, the chemical shifts of the carbons get progressively smaller as they get farther away from the deshielding oxygen.)

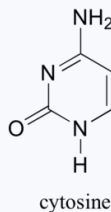
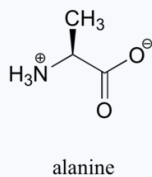
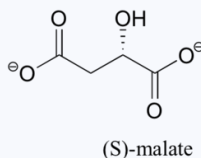
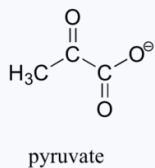


This property of  $^{13}\text{C}$ -NMR makes it very helpful in the elucidation of larger, more complex structures.

### EXAMPLE 13.5.3

$^{13}\text{C}$ -NMR (and DEPT) data for some common biomolecules are shown below (data is from the Aldrich Library of  $^1\text{H}$  and  $^{13}\text{C}$  NMR). Match the NMR data to the correct structure, and make complete peak assignments.

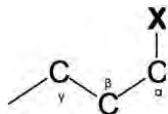
- spectrum a: 168.10 ppm (C), 159.91 ppm (C), 144.05 ppm (CH), 95.79 ppm (CH)
- spectrum b: 207.85 ppm (C), 172.69 ppm (C), 29.29 ppm ( $\text{CH}_3$ )
- spectrum c: 178.54 ppm (C), 53.25 ppm (CH), 18.95 ppm ( $\text{CH}_3$ )
- spectrum d: 183.81 ppm (C), 182.63 ppm (C), 73.06 ppm (CH), 45.35 ppm ( $\text{CH}_2$ )



Solution

## $^{13}\text{C}$ NMR CHEMICAL SHIFTS

The Carbon NMR is used for determining functional groups using characteristic shift values.  $^{13}\text{C}$  chemical shift is affected by electronegative effect and steric effect. If an H atom in an alkane is replaced by substituent X, electronegative atoms (O, N, halogen),  $\alpha$ -carbon and  $\beta$ -carbon shift to downfield (left; increase in ppm) while  $\gamma$ -carbon shifts to upfield. The steric effect is observed in acyclic and cyclic systems, which leads to downshifted chemical shifts. Figure 9 shows typical  $^{13}\text{C}$  chemical shift regions of the major chemical class.



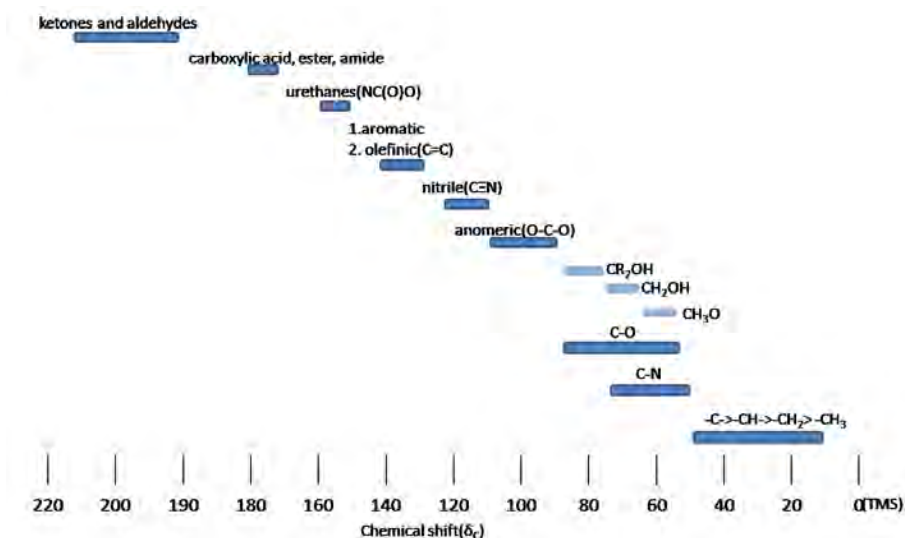


Figure 9:  $^{13}\text{C}$  Chemical shift range for organic compound

### SPIN-SPIN SPLITTING

Comparing the  $^1\text{H}$  NMR, there is a big difference thing in the  $^{13}\text{C}$  NMR. The  $^{13}\text{C}$ - $^{13}\text{C}$  spin-spin splitting rarely exist between adjacent carbons because  $^{13}\text{C}$  is naturally lower abundant (1.1%)

- **$^{13}\text{C}$ - $^1\text{H}$  Spin coupling:**  $^{13}\text{C}$ - $^1\text{H}$  Spin coupling provides useful information about the number of protons attached a carbon atom. In case of one bond coupling ( $^1J_{\text{CH}}$ ),  $-\text{CH}$ ,  $-\text{CH}_2$ , and  $\text{CH}_3$  have respectively doublet, triplet, quartets for the  $^{13}\text{C}$  resonances in the spectrum. However,  $^{13}\text{C}$ - $^1\text{H}$  Spin coupling has an disadvantage for  $^{13}\text{C}$  spectrum interpretation.  $^{13}\text{C}$ - $^1\text{H}$  Spin coupling is hard to analyze and reveal structure due to a forest of overlapping peaks that result from 100% abundance of  $^1\text{H}$ .
- **Decoupling:** Decoupling is the process of removing  $^{13}\text{C}$ - $^1\text{H}$  coupling interaction to simplify a spectrum and identify which pair of nuclei is involved in the  $J$  coupling. The decoupling  $^{13}\text{C}$  spectra shows only one peak(singlet) for each unique carbon in the molecule(Fig 10.). Decoupling is performed by irradiating at the frequency of one proton with continuous low-power RF.

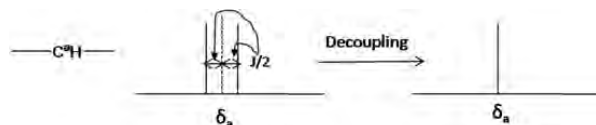


Fig 10. Decoupling in the  $^{13}\text{C}$  NMR

### CONTRIBUTORS

- Prof. Steven Farmer ([Sonoma State University](#))
- [Organic Chemistry With a Biological Emphasis](#) by Tim Soderberg (University of Minnesota, Morris)
- Chris P Schaller, Ph.D., ([College of Saint Benedict / Saint John's University](#))

12.12:  $^{13}\text{C}$  NMR Spectroscopy and DEPT is shared under a [CC BY-NC-SA 4.0](#) license and was authored, remixed, and/or curated by LibreTexts.



## 12.13: USES OF $^{13}\text{C}$ NMR SPECTROSCOPY

The interpretation of  $^{13}\text{C}$  NMR spectra does not form a part of Chemistry 350; hence, you may omit Section 13.7. Interested students may wish to read this section for enrichment purposes.

### FEATURES OF A C-13 NMR SPECTRUM

Butane shows two different peaks in the  $^{13}\text{C}$  NMR spectrum, below. Note that: the chemical shifts of these peaks are not very different from methane. The carbons in butane are in a similar environment to the one in methane.

- there are two distinct carbons in butane: the methyl, or  $\text{CH}_3$ , carbon, and the methylene, or  $\text{CH}_2$ , carbon.
- the methyl carbon absorbs slightly upfield, or at lower shift, around 10 ppm.
- the methylene carbon absorbs at slightly downfield, or at higher shift, around 20 ppm.
- other factors being equal, methylene carbons show up at slightly higher shift than methyl carbons.

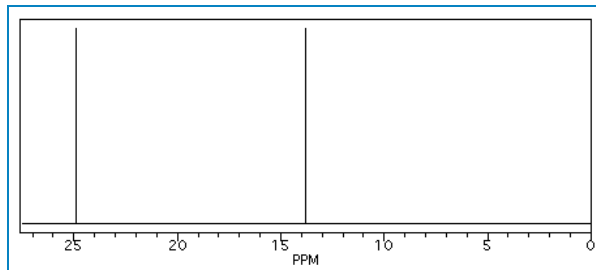


Figure NMR2. Simulated  $^{13}\text{C}$  NMR spectrum of butane (showing only the upfield portion of the spectrum).

In the  $^{13}\text{C}$  NMR spectrum of pentane (below), you can see three different peaks, even though pentane just contains methyl carbons and methylene carbons like butane. As far as the NMR spectrometer is concerned, pentane contains three different kinds of carbon, in three different environments. That result comes from symmetry.

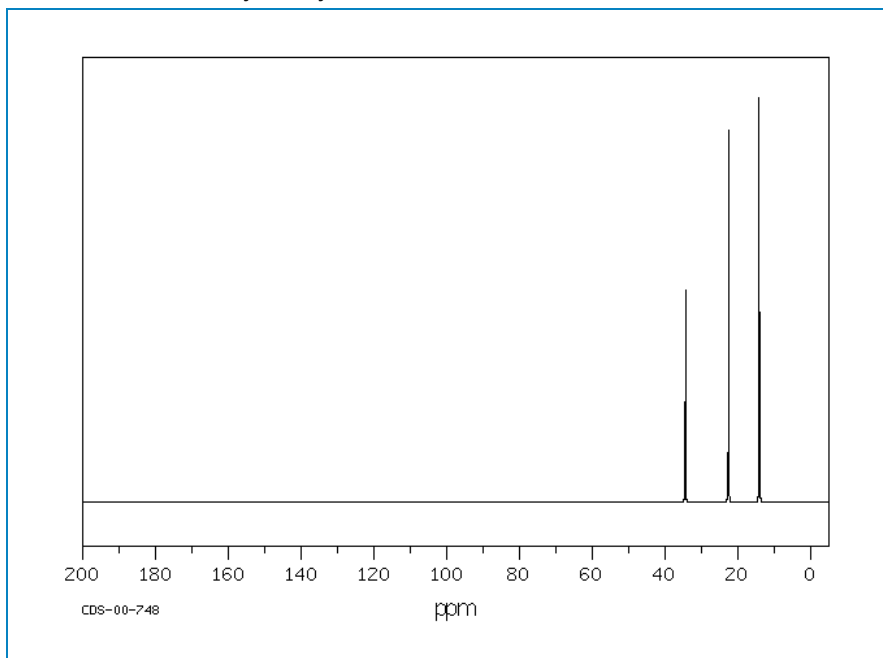


Figure NMR3.  $^{13}\text{C}$  NMR spectrum of pentane. Source: SDBSWeb : <http://riodb01.ibase.aist.go.jp/sdbs/> (National Institute of Advanced Industrial Science and Technology of Japan, 15 August 2008)

Symmetry is an important factor in spectroscopy. Nature says:

- atoms that are symmetry-inequivalent can absorb at different shifts.
- atoms that are symmetry-equivalent must absorb at the same shift.

To learn about symmetry, take a model of pentane and do the following:

- make sure the model is twisted into the most symmetric shape possible: a nice "W".
- choose one of the methyl carbons to focus on.
- rotate the model 180 degrees so that you are looking at the same "W" but from the other side.

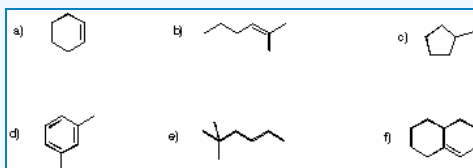
- note that the methyl you were focusing on has simply switched places with the other methyl group. These two carbons are symmetry-equivalent via two-fold rotation.

Animation NMR1. A three-dimensional model of pentane. Grab the model with the mouse and rotate it so that you are convinced that the second and fourth carbons are symmetry-equivalent, but the third carbon is not.

By the same process, you can see that the second and fourth carbons along the chain are also symmetry-equivalent. However, the middle carbon is not; it never switches places with the other carbons if you rotate the model. There are three different sets of inequivalent carbons; these three groups are not the same as each other according to symmetry.

### Example 12.13.1

Determine how many inequivalent carbons there are in each of the following compounds. How many peaks do you expect in each  $^{13}\text{C}$  NMR spectrum?

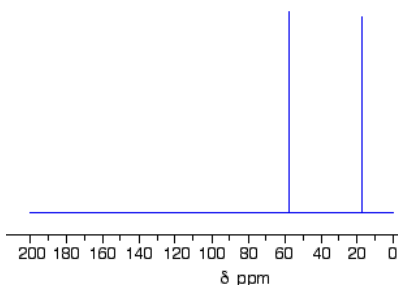


Practically speaking, there is only so much room in the spectrum from one end to the other. At some point, peaks can get so crowded together that you can't distinguish one from another. You might expect to see ten different peaks in eicosane, a twenty-carbon alkane chain, but when you look at the spectrum you can only see seven different peaks. That may be frustrating, because the experiment does not seem to agree with your expectation. However, you will be using a number of methods together to minimize the problem of misleading data.

### THE C-13 NMR SPECTRUM FOR ETHANOL

This is a simple example of a C-13 NMR spectrum. Don't worry about the scale for now - we'll look at that in a minute.

C-13 nmr spectrum for ethanol,  $\text{CH}_3\text{CH}_2\text{OH}$



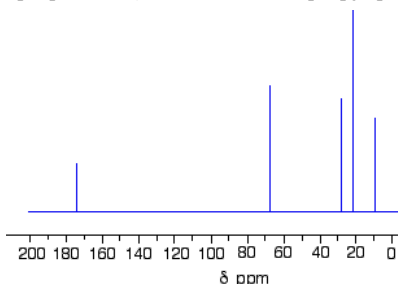
#### Note

Note: The NMR spectra on this page have been produced from graphs taken from the Spectral Data Base System for Organic Compounds (SDBS) at the National Institute of Materials and Chemical Research in Japan.

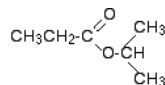
There are two peaks because there are two different environments for the carbons. The carbon in the  $\text{CH}_3$  group is attached to 3 hydrogens and a carbon. The carbon in the  $\text{CH}_2$  group is attached to 2 hydrogens, a carbon and an oxygen. The two lines are in different places in the NMR spectrum because they need different external magnetic fields to bring them in to resonance at a particular radio frequency.

### THE C-13 NMR SPECTRUM FOR A MORE COMPLICATED COMPOUND

This is the C-13 NMR spectrum for 1-methylethyl propanoate (also known as isopropyl propanoate or isopropyl propionate).



This time there are 5 lines in the spectrum. That means that there must be 5 different environments for the carbon atoms in the compound. Is that reasonable from the structure?



Well - if you count the carbon atoms, there are 6 of them. So why only 5 lines? In this case, two of the carbons are in exactly the same environment. They are attached to exactly the same things. Look at the two  $\text{CH}_3$  groups on the right-hand side of the molecule.

You might reasonably ask why the carbon in the  $\text{CH}_3$  on the left is not also in the same environment. Just like the ones on the right, the carbon is attached to 3 hydrogens and another carbon. But the similarity is not exact - you have to chase the similarity along the rest of the molecule as well to be sure.

The carbon in the left-hand  $\text{CH}_3$  group is attached to a carbon atom which in turn is attached to a carbon with two oxygens on it - and so on down the molecule. That's not exactly the same environment as the carbons in the right-hand  $\text{CH}_3$  groups. They are attached to a carbon which is attached to a single oxygen - and so on down the molecule. We'll look at this spectrum again in detail on the next page - and look at some more similar examples as well. This all gets easier the more examples you look at.

For now, all you need to realize is that each line in a C-13 NMR spectrum recognizes a carbon atom in one particular environment in the compound. If two (or more) carbon atoms in a compound have exactly the same environment, they will be represented by a single line.

#### Note

You might wonder why all this works, since only about 1% of carbon atoms are C-13. These are the only ones picked up by this form of NMR. If you had a single molecule of ethanol, then the chances are only about 1 in 50 of there being one C-13 atom in it, and only about 1 in 10,000 of both being C-13.

But you have got to remember that you will be working with a sample containing huge numbers of molecules. The instrument can pick up the magnetic effect of the C-13 nuclei in the carbon of the  $\text{CH}_3$  group and the carbon of the  $\text{CH}_2$  group even if they are in separate molecules. There's no need for them to be in the same one.

## CONTRIBUTORS AND ATTRIBUTIONS

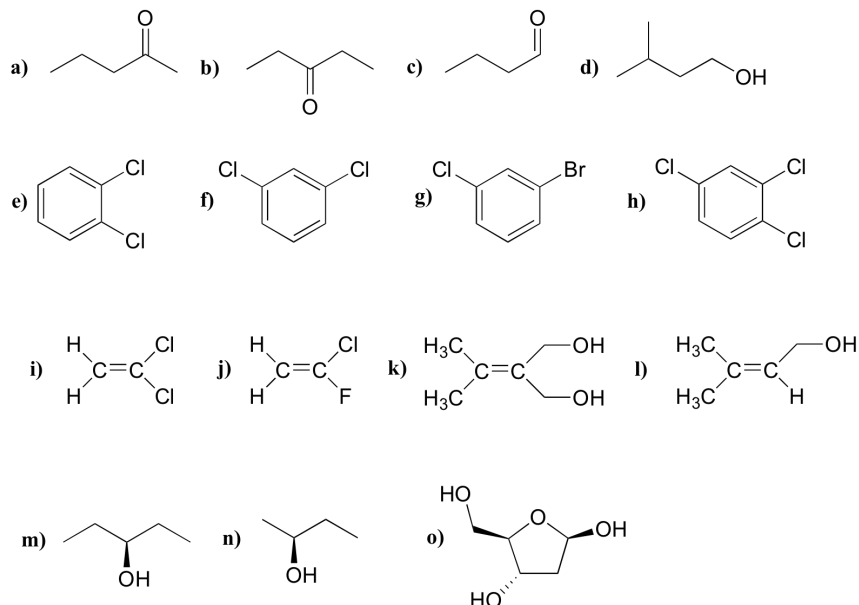
- Prof. Steven Farmer ([Sonoma State University](#))
- William Reusch, Professor Emeritus ([Michigan State U.](#)), [Virtual Textbook of Organic Chemistry](#)
- [Organic Chemistry With a Biological Emphasis](#) by [Tim Soderberg](#) (University of Minnesota, Morris)

12.13: Uses of  $^{13}\text{C}$  NMR Spectroscopy is shared under a [CC BY-NC-SA 4.0](#) license and was authored, remixed, and/or curated by LibreTexts.

## 12.14: MORE NMR EXAMPLES

### ADDITIONAL NMR EXAMPLES

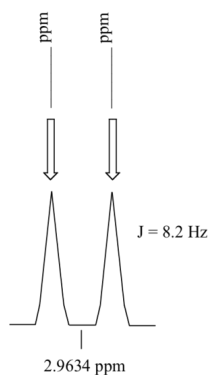
For each molecule, predict the number of signals in the  $^1\text{H}$ -NMR and the  $^{13}\text{C}$ -NMR spectra (do not count split peaks - eg. a quartet counts as only one signal). Assume that diastereotopic groups are non-equivalent.



**P5.2:** For each of the 20 common amino acids, predict the number of signals in the proton-decoupled  $^{13}\text{C}$ -NMR spectrum.

**P5.3:** Calculate the chemical shift value (expressed in Hz, to one decimal place) of each sub-peak on the  $^1\text{H}$ -NMR doublet signal below. Do this for:

- a spectrum obtained on a 300 MHz instrument
- a spectrum obtained on a 100 MHz instrument

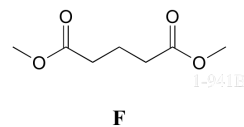
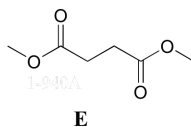
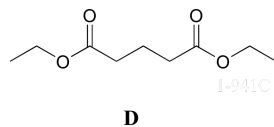
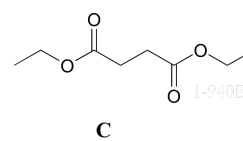
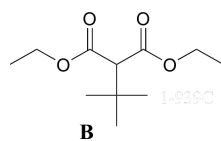
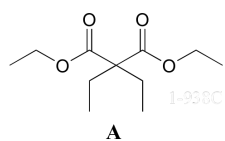


**P5.4:** Consider a quartet signal in an  $^1\text{H}$ -NMR spectrum obtained on a 300 MHz instrument. The chemical shift is recorded as 1.7562 ppm, and the coupling constant is  $J = 7.6$  Hz. What is the chemical shift, expressed to the nearest 0.1 Hz, of the furthest downfield sub-peak in the quartet? What is the resonance frequency (again expressed in Hz) of this sub-peak?)

**P5.5:** One easily recognizable splitting pattern for the aromatic proton signals from disubstituted benzene structures is a pair of doublets. Does this pattern indicate *ortho*, *meta*, or *para* substitution?

**P5.6 :**Match spectra below to their corresponding structures A-F.

Structures:



### Spectrum 1

$\delta$	splitting integration	
4.13	q	2
2.45	t	2
1.94	quintet	1
1.27	t	3

### Spectrum 2

$\delta$	splitting integration	
3.68	s	3
2.99	t	2
1.95	quintet	1

### Spectrum 3

$\delta$	splitting integration	
4.14	q	1
2.62	s	1
1.26	t	1.5

### Spectrum 4

$\delta$	splitting integration	
4.14	q	4
3.22	s	1
1.27	t	6
1.13	s	9

### Spectrum 5

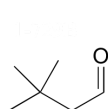
$\delta$	splitting integration	
4.18	q	1
1.92	q	1
1.23	t	1.5
0.81	t	1.5

### Spectrum 6

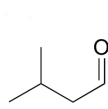
$\delta$	splitting integration	
3.69	s	1.5
2.63	s	1

P5.7: Match spectra 7-12 below to their corresponding structures G-L .

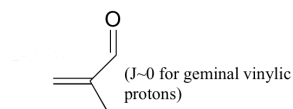
Structures:



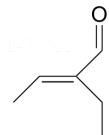
**G**



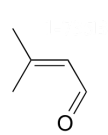
**H**



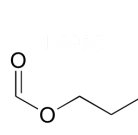
**I**



**J**



**K**



**L**

Spectrum 7:

$\delta$	splitting integration	
9.96	d	1
5.88	d	1
2.17	s	3
1.98	s	3

Spectrum 8:

$\delta$	splitting integration	
9.36	s	1
6.55	q	1
2.26	q	2
1.99	d	3
0.96	t	3

Spectrum 9:

$\delta$	splitting integration	
9.57	s	1
6.30	s	1
6.00	s	1
1.84	s	3

Spectrum 10:

$\delta$	splitting integration	
9.83	t	1
2.27	d	2
1.07	s	9

Spectrum 11:

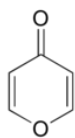
$\delta$	splitting integration	
9.75	t	1
2.30	dd	2
2.21	m	1
0.98	d	6

Spectrum 12:

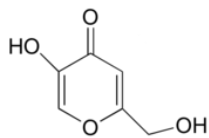
$\delta$	splitting integration	
8.08	s	1
4.13	t	2
1.70	m	2
0.96	t	3

**P5.8:** Match the  $^1\text{H}$ -NMR spectra 13-18 below to their corresponding structures M-R .

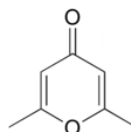
Structures:



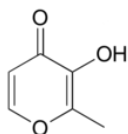
**M**



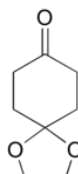
**N**



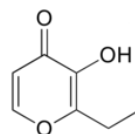
**O**



**P**



**Q**



**R**

Spectrum 13:

$\delta$	splitting integration	
8.15	d	1
6.33	d	1

Spectrum 14: 1-723C (structure O)

$\delta$	splitting integration	
6.05	s	1
2.24	s	3

Spectrum 15:

$\delta$	splitting integration	
8.57	s (b)	1
7.89	d	1
6.30	d	1
2.28	s	3

Spectrum 16:

$\delta$	splitting integration	
9.05	s (b)	1
8.03	s	1
6.34	s	1
5.68	s (b)	1
4.31	s	2

Spectrum 17:

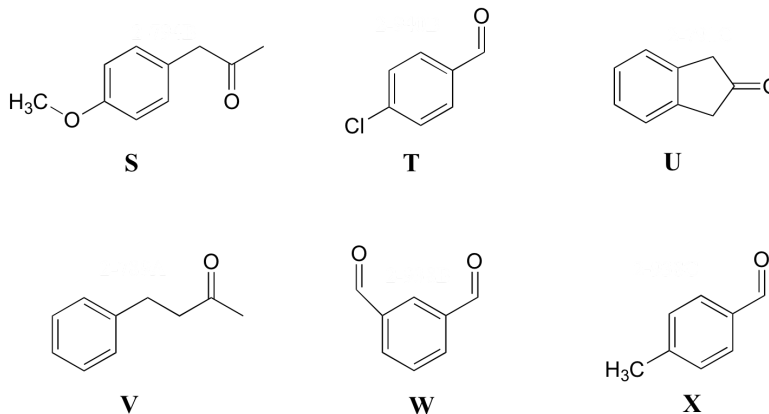
$\delta$	splitting integration	
7.76	d	1
7.57	s (b)	1
6.44	d	1
2.78	q	2
1.25	t	3

Spectrum 18:

$\delta$	splitting integration	
4.03	s	1
2.51	t	1
2.02	t	1

P5.9: Match the  $^1\text{H}$ -NMR spectra 19-24 below to their corresponding structures S-X.

Structures:



Spectrum 19:

$\delta$	splitting integration	
9.94	s	1
7.77	d	2
7.31	d	2
2.43	s	3

Spectrum 20:

$\delta$	splitting integration	
10.14	s	2
8.38	s	1
8.17	d	2
7.75	t	1

Spectrum 21:

$\delta$	splitting integration	
9.98	s	1
7.81	d	2
7.50	d	2

Spectrum 22:

$\delta$	splitting integration	
7.15-7.29	m	2.5
2.86	t	1
2.73	t	1
2.12	s	1.5



Spectrum 23:

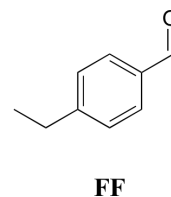
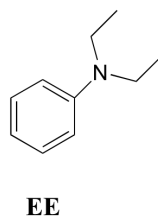
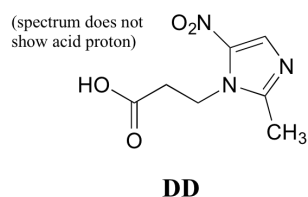
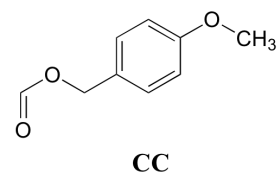
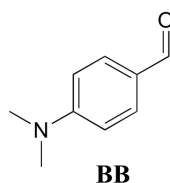
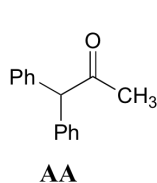
$\delta$	splitting integration	
7.10	d	1
6.86	d	1
3.78	s	1.5
3.61	s	1
2.12	s	1.5

Spectrum 24:

$\delta$	splitting integration	
7.23-7.30	m	1
3.53	s	1

**P5.10:** Match the  $^1\text{H}$ -NMR spectra 25-30 below to their corresponding structures AA-FF.

Structures:



Spectrum 25:

$\delta$	splitting integration	
9.96	s	1
7.79	d	2
7.33	d	2
2.72	q	2
1.24	t	3

Spectrum 26:

$\delta$	splitting integration	
9.73	s	1
7.71	d	2
6.68	d	2
3.06	s	6

Spectrum 27:

$\delta$	splitting integration	
7.20-7.35	m	10
5.12	s	1
2.22	s	3

Spectrum 28:

$\delta$	splitting integration	
8.08	s	1
7.29	d	2
6.87	d	2
5.11	s	2
3.78	s	3

Spectrum 29:

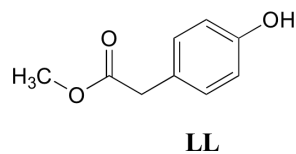
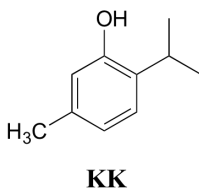
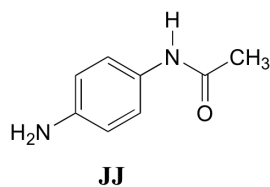
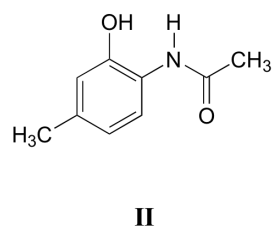
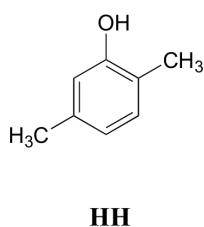
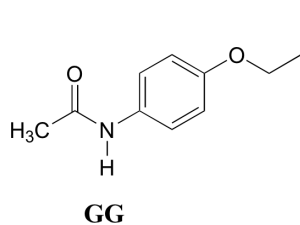
$\delta$	splitting integration	
7.18	d	1
6.65	m	1.5
3.2	q	2
1.13	t	3

Spectrum 30:

$\delta$	splitting integration	
8.32	s	1
4.19	t	2
2.83	t	2
2.40	s	3

P5.11: Match the  $^1\text{H}$ -NMR spectra 31-36 below to their corresponding structures GG-LL

Structures:



Spectrum 31:

$\delta$	splitting integration	
6.98	d	1
6.64	d	1
6.54	s	1
4.95	s	1
2.23	s	3
2.17	s	3

Spectrum 32:

$\delta$	splitting	integration
7.08	d	1
6.72	d	1
6.53	s	1
4.81	s	1
3.15	7-tet	1
2.24	s	3
1.22	d	6

Spectrum 33:

$\delta$	splitting	integration
7.08	d	2
6.71	d	2
6.54	s	1
3.69	s	3
3.54	s	2

Spectrum 34:

$\delta$	splitting	integration
9.63	s	1
7.45	d	2
6.77	d	2
3.95	q	2
2.05	s	3
1.33	t	3

Spectrum 35:

$\delta$	splitting	integration
9.49	s	1
7.20	d	2
6.49	d	2
4.82	s	2
1.963	s	3

Spectrum 36:

$\delta$	splitting	integration
9.58	s(b)	1
9.31	s	1
7.36	d	1
6.67	s	1
6.55	d	1
2.21	s	3
2.11	s	3

**P5.12:** Use the NMR data given to deduce structures.

a ) Molecular formula:  $C_5H_8O$

$^1H$ -NMR:

$\delta$	splitting	integration
9.56	s	1
6.25	d (J~1 Hz)	1
5.99	d (J~1 Hz)	1
2.27	q	2
1.18	t	3

### $^{13}\text{C}$ -NMR

$\delta$	DEPT
194.60	CH
151.77	C
132.99	CH <sub>2</sub>
20.91	CH <sub>2</sub>
11.92	CH <sub>3</sub>

b) Molecular formula:  $\text{C}_7\text{H}_{14}\text{O}_2$

### $^1\text{H}$ -NMR:

$\delta$	splitting	integration
3.85	d	2
2.32	q	2
1.93	m	1
1.14	t	3
0.94	d	6

### $^{13}\text{C}$ -NMR

$\delta$	DEPT
174.47	C
70.41	CH <sub>2</sub>
27.77	CH
27.64	CH <sub>2</sub>
19.09	CH <sub>3</sub>
9.21	CH <sub>3</sub>

c) Molecular formula:  $\text{C}_5\text{H}_{12}\text{O}$

### $^1\text{H}$ -NMR:

$\delta$	splitting	integration
3.38	s	2H
2.17	s	1H
0.91	s	9H

### $^{13}\text{C}$ -NMR

$\delta$	DEPT
73.35	CH <sub>2</sub>
32.61	C
26.04	CH <sub>3</sub>

d) Molecular formula:  $C_{10}H_{12}O$

$^1H$ -NMR:

$\delta$	splitting	integration
7.18-7.35	m	2.5
3.66	s	1
2.44	q	1
1.01	t	1.5

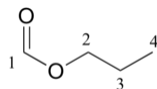
$^{13}C$ -NMR

$\delta$	DEPT
208.79	C
134.43	C
129.31	CH
128.61	CH
126.86	CH
49.77	CH <sub>2</sub>
35.16	CH <sub>2</sub>
7.75	CH <sub>3</sub>

P5.13:

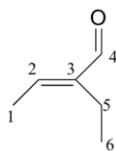
$^{13}C$ -NMR data is given for the molecules shown below. Complete the peak assignment column of each NMR data table.

a)



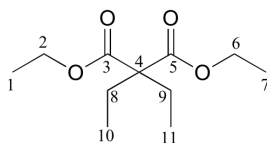
$\delta$	DEPT	carbon #
161.12	CH	
65.54	CH <sub>2</sub>	
21.98	CH <sub>2</sub>	
10.31	CH <sub>3</sub>	

b)



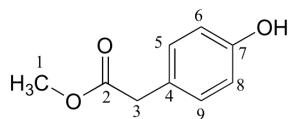
$\delta$	DEPT	carbon #
194.72	C	
149.10	C	
146.33	CH	
16.93	CH <sub>2</sub>	
14.47	CH <sub>3</sub>	
12.93	CH <sub>3</sub>	

c)



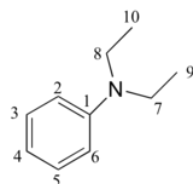
$\delta$	DEPT carbon #
171.76	C
60.87	CH <sub>2</sub>
58.36	C
24.66	CH <sub>2</sub>
14.14	CH <sub>3</sub>
8.35	CH <sub>3</sub>

d)



$\delta$	DEPT carbon #
173.45	C
155.01	C
130.34	CH
125.34	C
115.56	CH
52.27	CH <sub>3</sub>
40.27	CH <sub>2</sub>

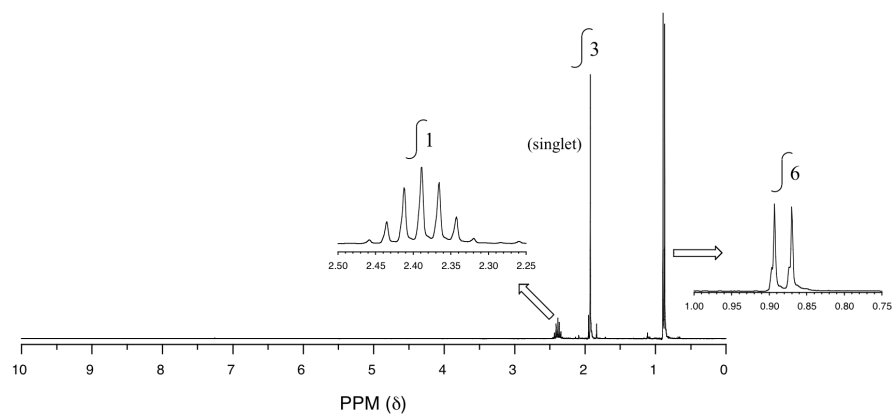
e)



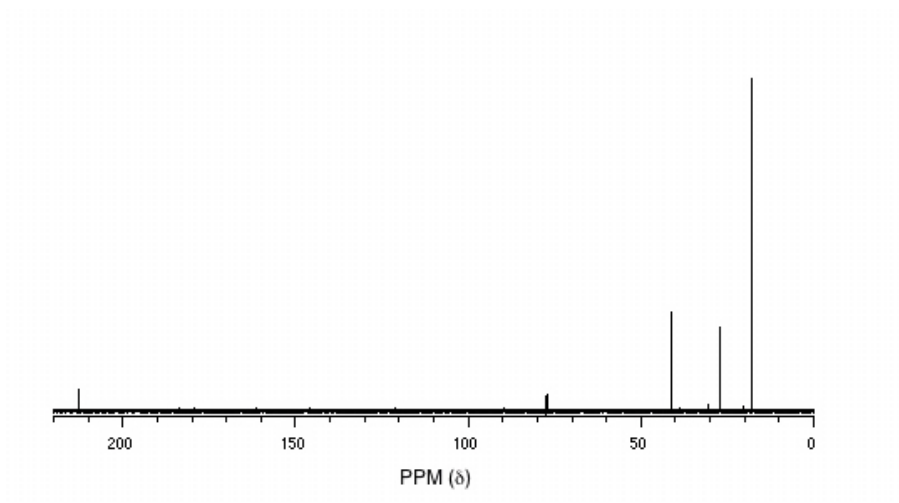
$\delta$	DEPT carbon #
147.79	C
129.18	CH
115.36	CH
111.89	CH
44.29	CH <sub>2</sub>
12.57	CH <sub>3</sub>

**P5.14:** You obtain the following data for an unknown sample. Deduce its structure.

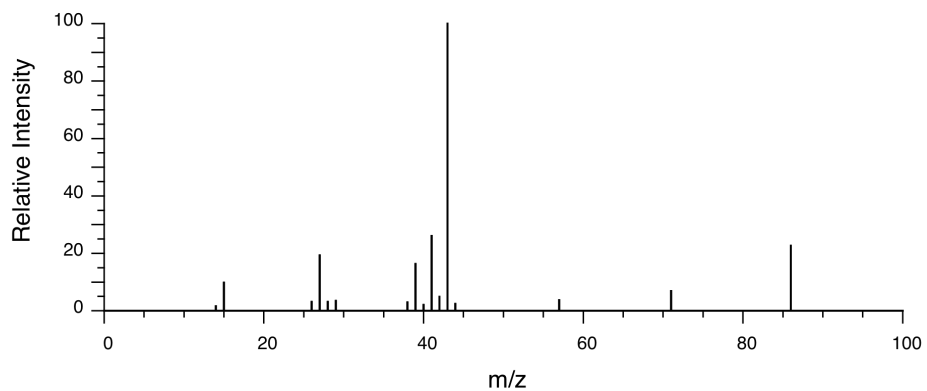
<sup>1</sup>H-NMR:



$^{13}\text{C}$ -NMR:



Mass Spectrometry:



**P5.15:** You take a  $^1\text{H}$ -NMR spectrum of a sample that comes from a bottle of 1-bromopropane. However, you suspect that the bottle might be contaminated with 2-bromopropane. The NMR spectrum shows the following peaks:

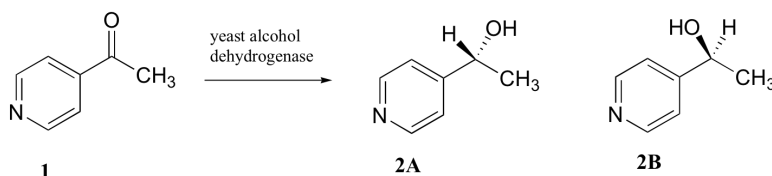
$\delta$	splitting integration	
4.3	septet	0.0735
3.4	triplet	0.661
1.9	sextet	0.665
1.7	doublet	0.441
1.0	triplet	1.00

How badly is the bottle contaminated? Specifically, what percent of the molecules in the bottle are 2-bromopropane?

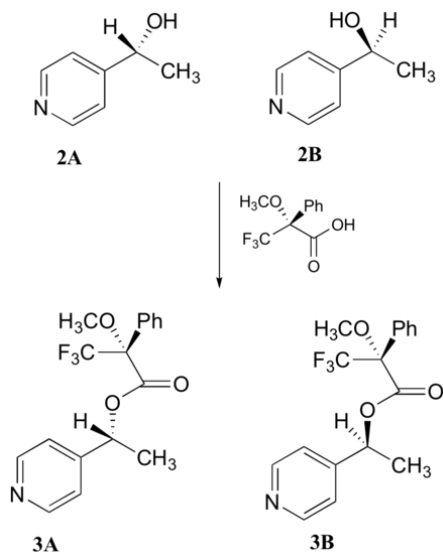
### Challenge problems

**C5.1:** All of the  $^{13}\text{C}$ -NMR spectra shown in this chapter include a signal due to  $\text{CDCl}_3$ , the solvent used in each case. Explain the splitting pattern for this signal.

**C5.2:** Researchers wanted to investigate a reaction which can be catalyzed by the enzyme alcohol dehydrogenase in yeast. They treated 4'-acetylpyridine (1) with living yeast, and isolated the alcohol product(s) (some combination of 2A and 2B).



- Will the products 2A and 2B have identical or different  $^1\text{H}$ -NMR spectra? Explain.
- Suggest a  $^1\text{H}$ -NMR experiment that could be used to determine what percent of starting material (1) got turned into product (2A and 2B).
- With purified 2A/2B, the researchers carried out the subsequent reaction shown below to make 3A and 3B, known as 'Mosher's esters'. Do 3A and 3B have identical or different  $^1\text{H}$ -NMR spectra? Explain.



- Explain, very specifically, how the researchers could use  $^1\text{H}$ -NMR to determine the relative amounts of 2A and 2B formed in the reaction catalyzed by yeast enzyme.

12.14: More NMR Examples is shared under a CC BY-NC-SA 4.0 license and was authored, remixed, and/or curated by LibreTexts.



## 12.15: SAMPLE NMR SPECTRA

### SAMPLE <sup>1</sup>H-NMR SPECTRA

List of Animated <sup>1</sup> H-NMR Spectra				
Bromoethane	1-bromopropane	2-propanol	3-bromopropene	propanal
Phenol	acetone	propanoic acid	ethyl acetate	2-propenamide
For all spectra click on a peak to highlight the protons responsible for the peak.				
More spectra can be found at <a href="#">Animated Spectra</a>				

To see the integrals, right click on the spectra to open the menu, go to "view" and check the integrate" box.

### CONTRIBUTORS AND ATTRIBUTIONS

Dr. Richard Spinney (The Ohio State University)

12.15: Sample NMR Spectra is shared under a [CC BY-NC-SA 4.0](#) license and was authored, remixed, and/or curated by LibreTexts.